
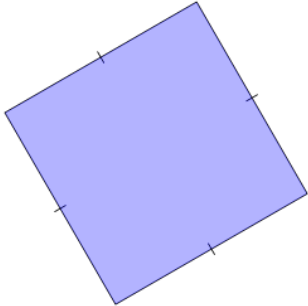




## Is Shape a Parallelogram (from image)



1



Is the shape a parallelogram

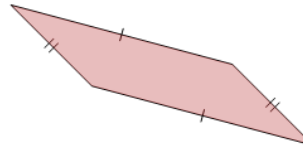
A

Parallelogram

B

Not a Parallelogram

2



Is the shape a parallelogram

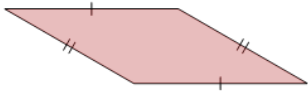
A

Not a Parallelogram

B

Parallelogram

3



Is the shape a parallelogram

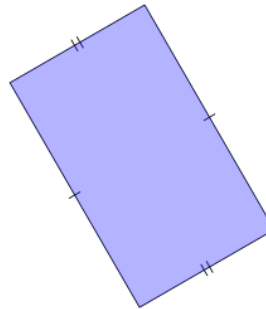
A

Parallelogram

B

Not a Parallelogram

4



Is the shape a parallelogram

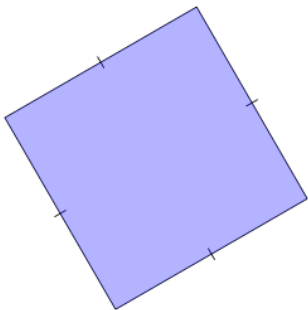
A

Parallelogram

B

Not a Parallelogram

5



Is the shape a parallelogram

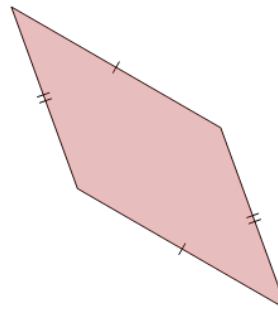
A

Parallelogram

B

Not a Parallelogram

6



Is the shape a parallelogram

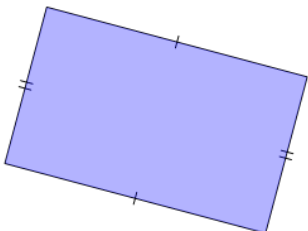
A

Not a Parallelogram

B

Parallelogram

7



Is the shape a parallelogram

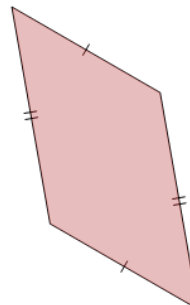
A

Parallelogram

B

Not a Parallelogram

8



Is the shape a parallelogram

A

Parallelogram

B

Not a Parallelogram