
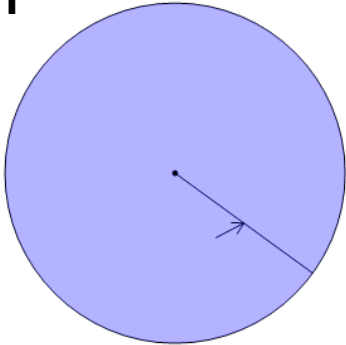




Parts of a Circle (Advanced) - True/False

**1**

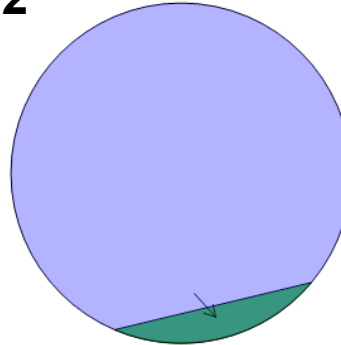
Is the part of the circle identified by the arrow a 'center'?

A

It is a center

B

It is not a center

2

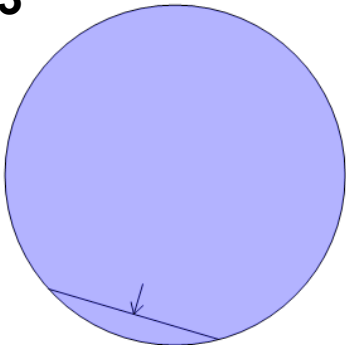
Is the part of the circle identified by the arrow a 'circumference'?

A

It is a circumference

B

It is not a circumference

3

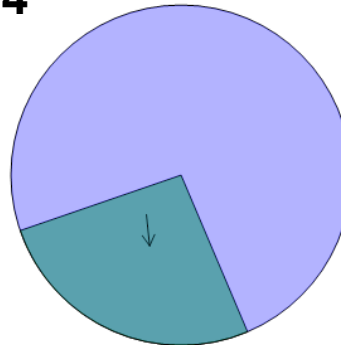
Is the part of the circle identified by the arrow a 'chord'?

A

It is a chord

B

It is not a chord

4

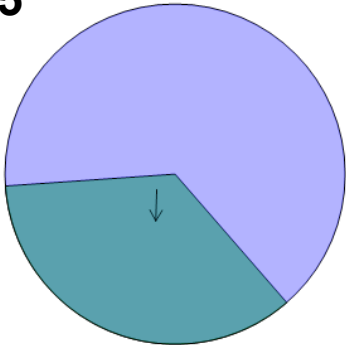
Is the part of the circle identified by the arrow a 'sector'?

A

It is a sector

B

It is not a sector

5

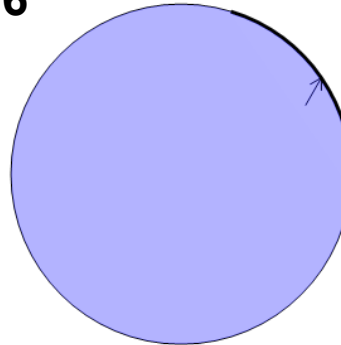
Is the part of the circle identified by the arrow a 'sector'?

A

It is a sector

B

It is not a sector

6

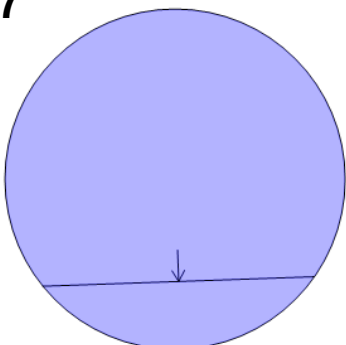
Is the part of the circle identified by the arrow a 'segment'?

A

It is a segment

B

It is not a segment

7

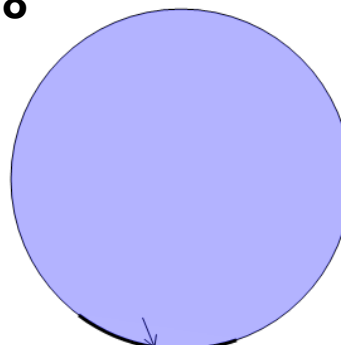
Is the part of the circle identified by the arrow a 'chord'?

A

It is a chord

B

It is not a chord

8

Is the part of the circle identified by the arrow an 'arc'?

A

It is an arc

B

It is not an arc