




# mobius

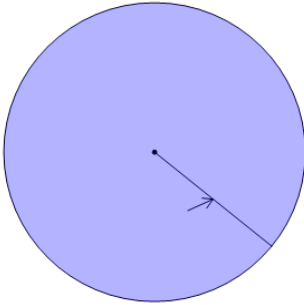
## Parts of a Circle

Name \_\_\_\_\_



1

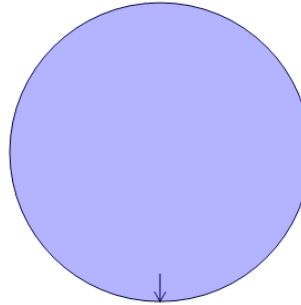
Name the part of the circle identified by the arrow



- |   |         |   |         |
|---|---------|---|---------|
| A | chord   | B | tangent |
| C | radius  | D | center  |
| E | segment | F | sector  |

2

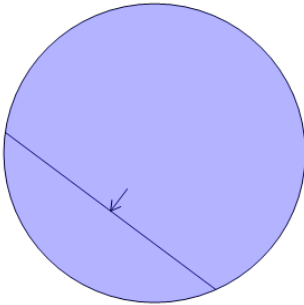
Name the part of the circle identified by the arrow



- |   |               |
|---|---------------|
| A | circumference |
| B | center        |
| C | radius        |
| D | chord         |
| E | sector        |
| F | tangent       |

3

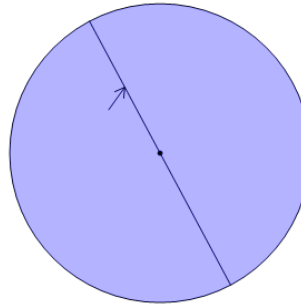
Name the part of the circle identified by the arrow



- |   |               |
|---|---------------|
| A | center        |
| B | chord         |
| C | circumference |
| D | segment       |
| E | arc           |
| F | sector        |

4

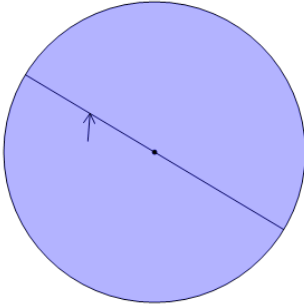
Name the part of the circle identified by the arrow



- |   |               |
|---|---------------|
| A | diameter      |
| B | center        |
| C | chord         |
| D | circumference |
| E | sector        |
| F | segment       |

5

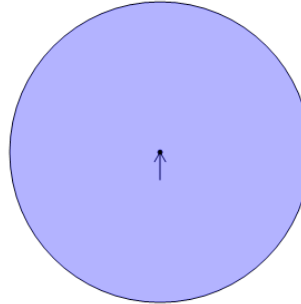
Name the part of the circle identified by the arrow



- |   |               |
|---|---------------|
| A | arc           |
| B | chord         |
| C | segment       |
| D | radius        |
| E | diameter      |
| F | circumference |

6

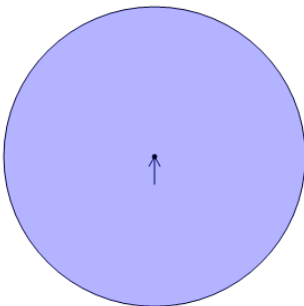
Name the part of the circle identified by the arrow



- |   |               |
|---|---------------|
| A | circumference |
| B | chord         |
| C | sector        |
| D | tangent       |
| E | arc           |
| F | center        |

7

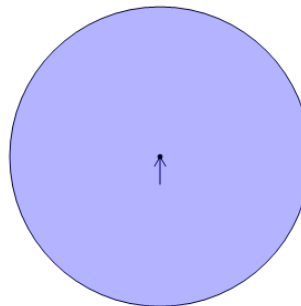
Name the part of the circle identified by the arrow



- |   |               |
|---|---------------|
| A | tangent       |
| B | center        |
| C | radius        |
| D | circumference |
| E | arc           |
| F | chord         |

8

Name the part of the circle identified by the arrow



- |   |               |
|---|---------------|
| A | sector        |
| B | chord         |
| C | segment       |
| D | circumference |
| E | center        |
| F | tangent       |