




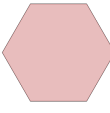
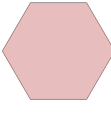








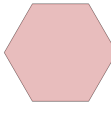









## Classifying Polygons by Sides - Reversed



<b>1</b> Select the shape that is named   Hexagon	A 	B 	C 
	D 	E 	F 
<b>3</b> Select the shape that is named   Square	A 	B 	C 
	D 		
<b>2</b> Select the shape that is named   Octagon	A 	B 	C 
	D 	E 	F 
<b>4</b> Select the shape that is named   Pentagon	A 	B 	C 
	D 	E 	F 