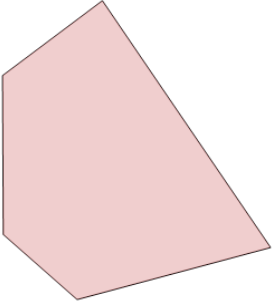
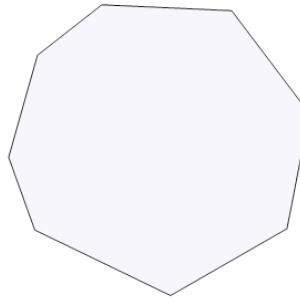


1 Name the type of shape



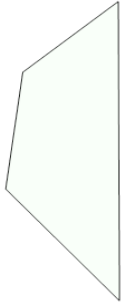
- A hexagon
- B quadrilateral
- C pentagon
- D octagon

2 Name the type of shape



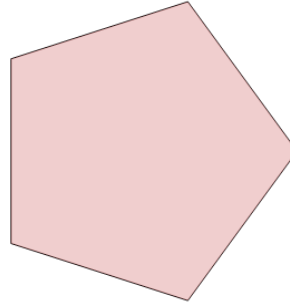
- A pentagon
- B hexagon
- C octagon
- D quadrilateral

3 Name the type of shape



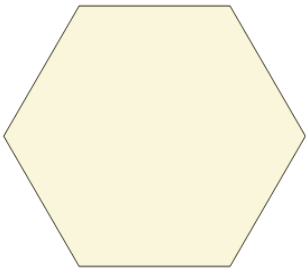
- A octagon
- B hexagon
- C pentagon
- D quadrilateral

4 Name the type of shape



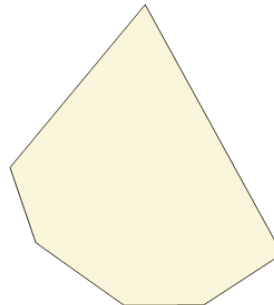
- A quadrilateral
- B pentagon
- C hexagon
- D octagon

5 Name the type of shape




- A pentagon
- B hexagon
- C quadrilateral
- D octagon

6 Name the type of shape



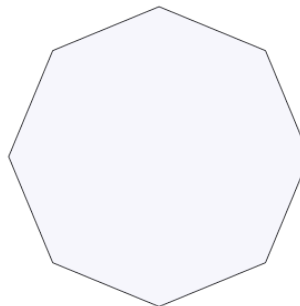
- A hexagon
- B octagon
- C quadrilateral
- D pentagon

7 Name the type of shape



- A octagon
- B hexagon
- C pentagon
- D quadrilateral

8 Name the type of shape



- A hexagon
- B octagon
- C pentagon
- D quadrilateral