




Classifying Polygons by Sides

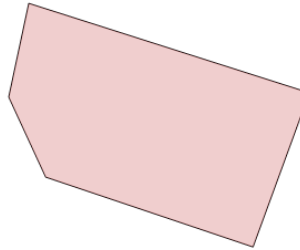


1 Name the type of shape



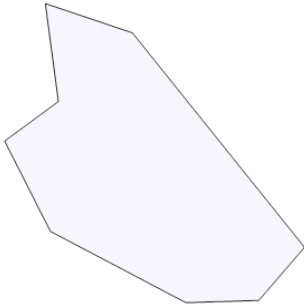
- A pentagon
- B octagon
- C quadrilateral
- D hexagon

2 Name the type of shape



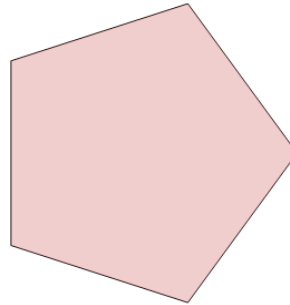
- A pentagon
- B quadrilateral
- C hexagon
- D octagon

3 Name the type of shape



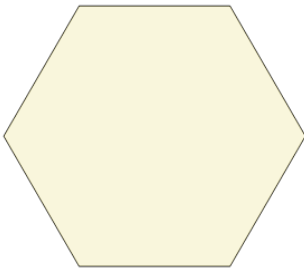
- A quadrilateral
- B octagon
- C pentagon
- D hexagon

4 Name the type of shape



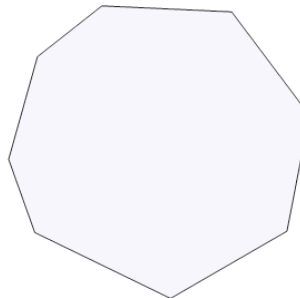
- A hexagon
- B octagon
- C quadrilateral
- D pentagon

5 Name the type of shape



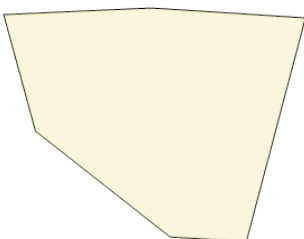
- A hexagon
- B quadrilateral
- C octagon
- D pentagon

6 Name the type of shape



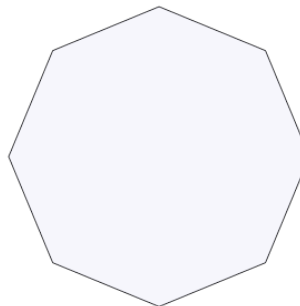
- A hexagon
- B pentagon
- C octagon
- D quadrilateral

7 Name the type of shape



- A hexagon
- B pentagon
- C octagon
- D quadrilateral

8 Name the type of shape



- A hexagon
- B pentagon
- C octagon
- D quadrilateral