
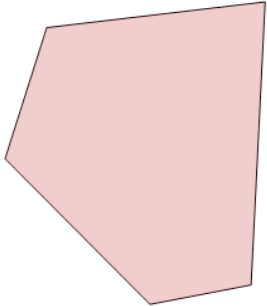




Classifying Polygons as Regular or Irregular



1



Name the type of shape

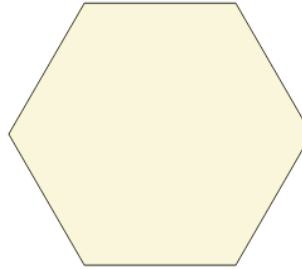
A

Regular

B

Irregular

2



Name the type of shape

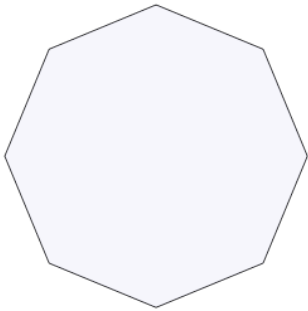
A

Irregular

B

Regular

3



Name the type of shape

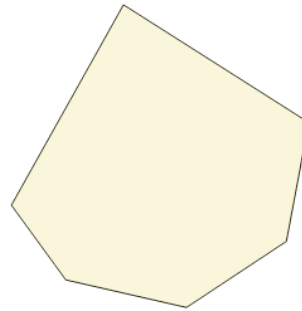
A

Irregular

B

Regular

4



Name the type of shape


A

Regular

B

Irregular

5



Name the type of shape


A

Regular

B

Irregular

6



Name the type of shape

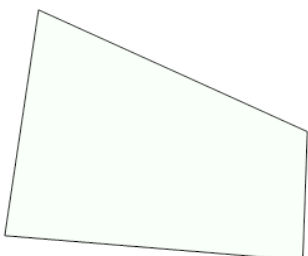
A

Irregular

B

Regular

7



Name the type of shape

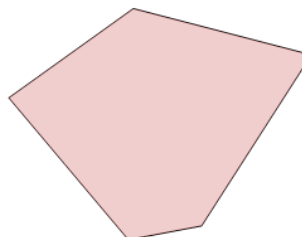
A

Irregular

B

Regular

8



Name the type of shape

A

Regular

B

Irregular