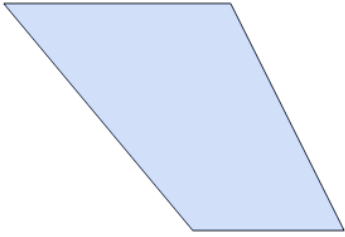




Quadrilaterals - Is Shape of a Type

**1**

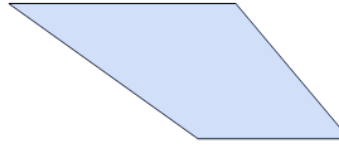
Is this shape a Parallelogram
(two pairs of parallel sides)?

A

No

B

Yes

2

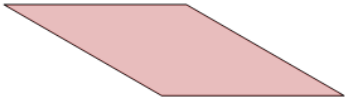
Is this shape a Kite (two sides
of one length connected to
each other, two sides of a
different length)?

A

Yes

B

No

3

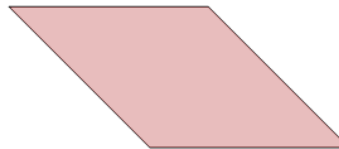
Is this shape a Rhombus (four
sides of the same length)?

A

No

B

Yes

4

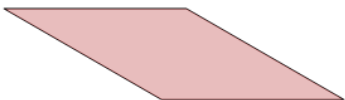
Is this shape a Circle (a line
that is always the same
distance from a center point)?

A

Yes

B

No

5

Is this shape a Trapezoid (a
four-sided shape with a pair of
parallel sides of different
lengths)?

A

No

B

Yes

6

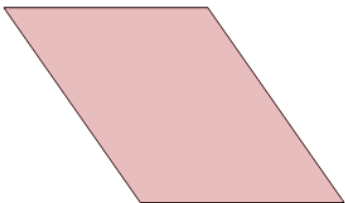
Is this shape a Parallelogram
(two pairs of parallel sides)?

A

Yes

B

No

7


Is this shape a Circle (a line
that is always the same
distance from a center point)?

A

No

B

Yes

8

Is this shape a Square (four
sides of the same length, all at
right angles)?

A

Yes

B

No