





## Slope Concept Intro Picture - Rise/Run Naming from Term



1



Which dimension of this roof is the run?

A


width

B

height

Run

2



Which dimension of this ski jump is the run?

A


height

B

width

Run

3



Which dimension of this ski jump is the rise?

A

height

B

width

Run

4



Which dimension of this slide is the rise?

A

width

B

height

Run