



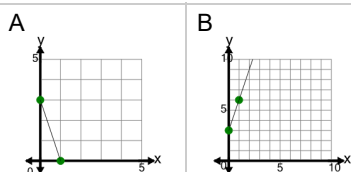
Slope - Find Equivalent - Slope Y Intercept Form to Graph



1

What graphed line shows this
line equation?

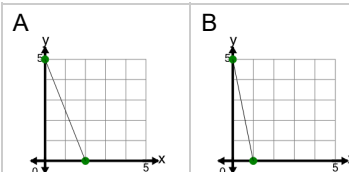
$$y = -3x + 3$$



2

What graphed line shows this
line equation?

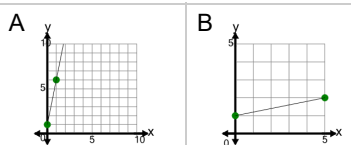
$$y = -5x + 5$$



3

What graphed line shows this
line equation?

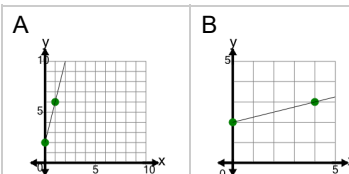
$$y = \frac{1}{5}x + 1$$



4

What graphed line shows this
line equation?

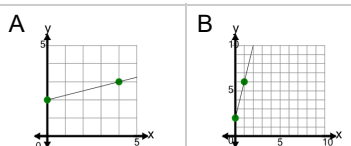
$$y = 4x + 2$$



5

What graphed line shows this
line equation?

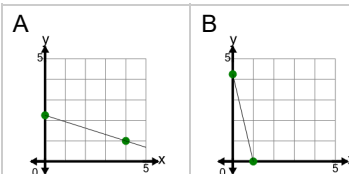
$$y = \frac{1}{4}x + 2$$



6

What graphed line shows this
line equation?

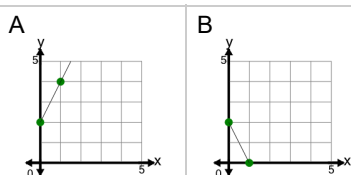
$$y = -\frac{1}{4}x + 2.25$$



7

What graphed line shows this
line equation?

$$y = 2x + 2$$



8

What graphed line shows this
line equation?

$$y = 3x + 1$$

