



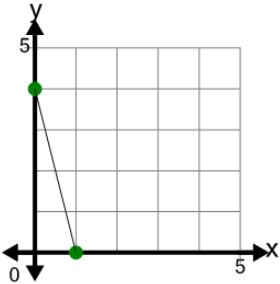
## Slope - Find Parallel - Decimal Slope to Graph

**1**

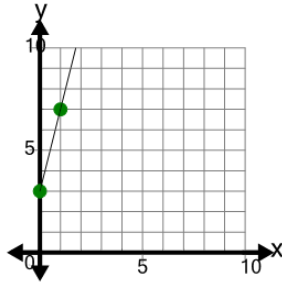
What line has a slope that is PARALLEL to this slope?

 $m=4$ 

A



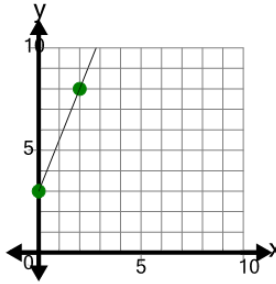
B

**2**

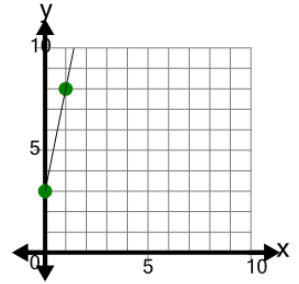
What line has a slope that is PARALLEL to this slope?

 $m=5$ 

A



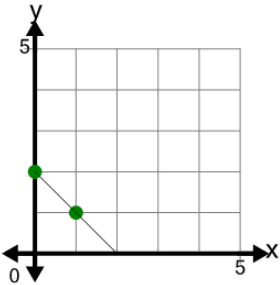
B

**3**

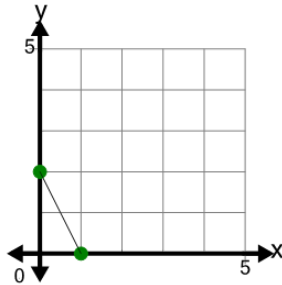
What line has a slope that is PARALLEL to this slope?

 $m=-2$ 

A



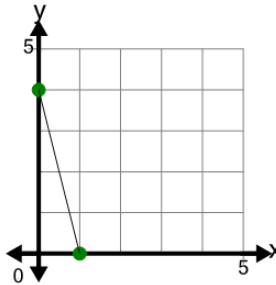
B

**4**

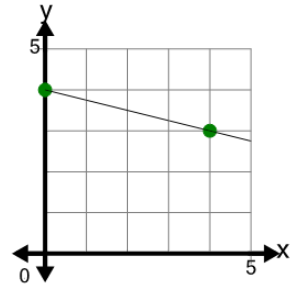
What line has a slope that is PARALLEL to this slope?

 $m=-4$ 

A



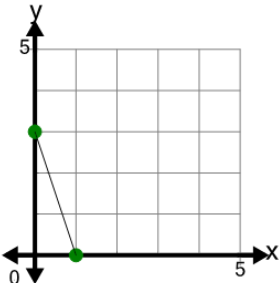
B

**5**

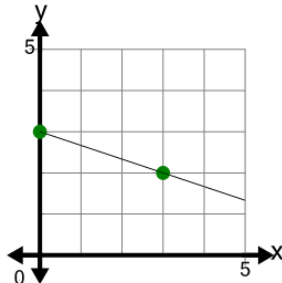
What line has a slope that is PARALLEL to this slope?

 $m=-3$ 

A



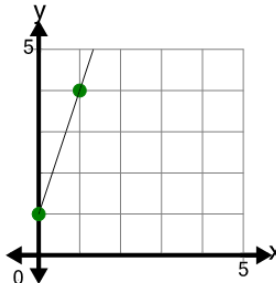
B

**6**

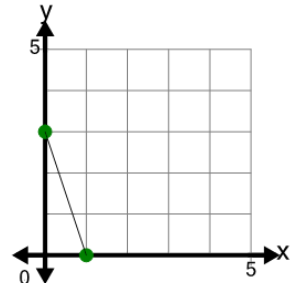
What line has a slope that is PARALLEL to this slope?

 $m=3$ 

A



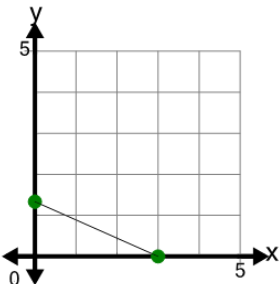
B

**7**

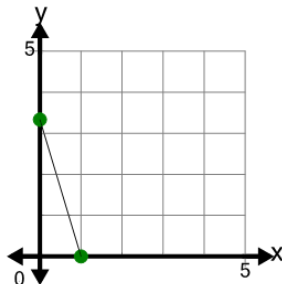
What line has a slope that is PARALLEL to this slope?

 $m=-0.33$ 

A



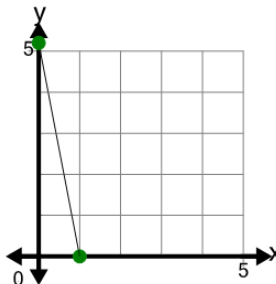
B

**8**

What line has a slope that is PARALLEL to this slope?

 $m=-0.2$ 

A



B

