




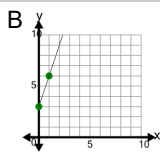
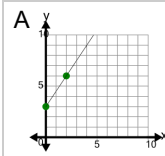
Slope - Find Parallel - Fraction Slope to Graph



1

What line has a slope that is
PARALLEL to this slope?

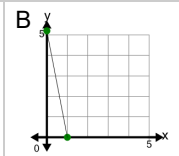
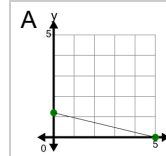
$$m = 3$$



2

What line has a slope that is
PARALLEL to this slope?

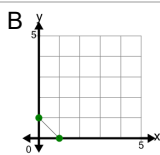
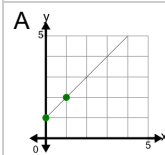
$$m = -\frac{1}{5}$$



3

What line has a slope that is
PARALLEL to this slope?

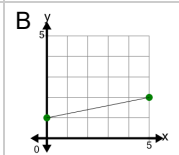
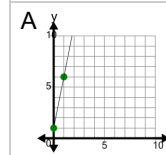
$$m = 1$$



4

What line has a slope that is
PARALLEL to this slope?

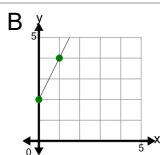
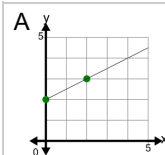
$$m = 5$$



5

What line has a slope that is
PARALLEL to this slope?

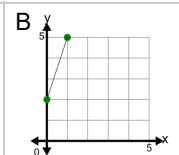
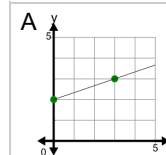
$$m = \frac{1}{2}$$



6

What line has a slope that is
PARALLEL to this slope?

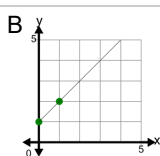
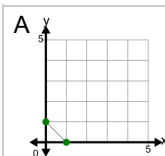
$$m = \frac{1}{3}$$



7

What line has a slope that is
PARALLEL to this slope?

$$m = -1$$



8

What line has a slope that is
PARALLEL to this slope?

$$m = -2$$

