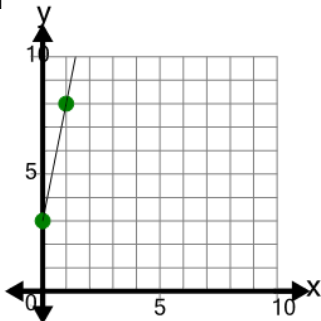




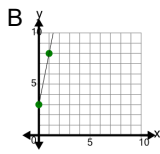
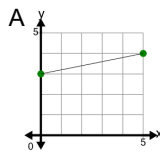
Slope - Find Parallel - Graph to Graph



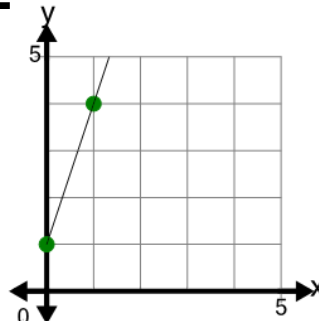
1



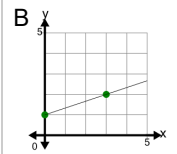
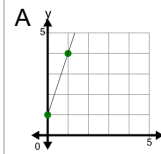
What line has a slope that is
PARALLEL to the slope of the
line on this graph?



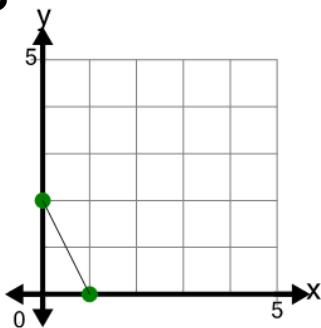
2



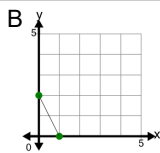
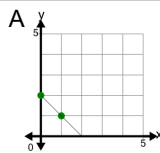
What line has a slope that is
PARALLEL to the slope of the
line on this graph?



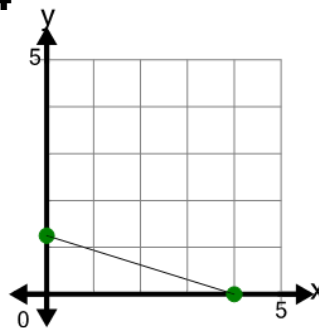
3



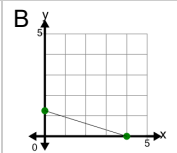
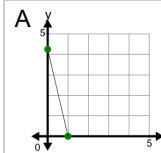
What line has a slope that is
PARALLEL to the slope of the
line on this graph?



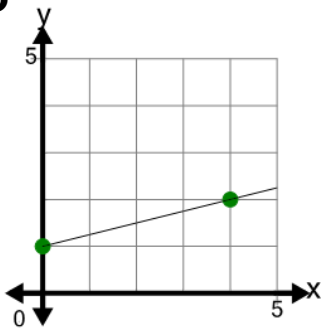
4



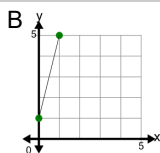
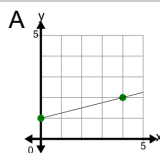
What line has a slope that is
PARALLEL to the slope of the
line on this graph?



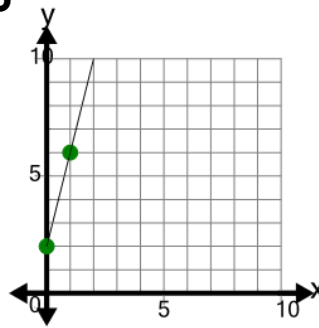
5



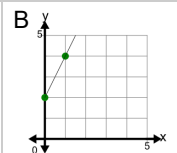
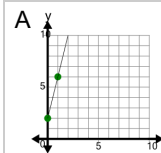
What line has a slope that is
PARALLEL to the slope of the
line on this graph?



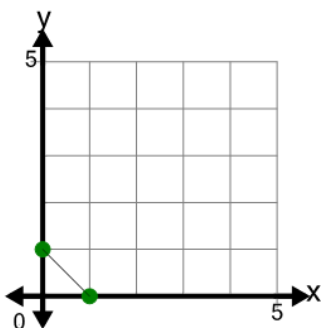
6



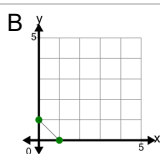
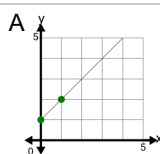
What line has a slope that is
PARALLEL to the slope of the
line on this graph?



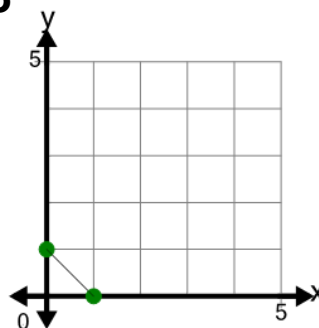
7



What line has a slope that is
PARALLEL to the slope of the
line on this graph?



8



What line has a slope that is
PARALLEL to the slope of the
line on this graph?

