

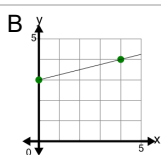
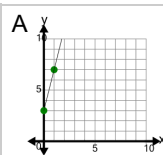


Slope - Find Perpendicular - Fraction Slope to Graph

1

What line has a slope that is
PERPENDICULAR to this
slope?

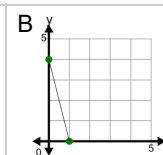
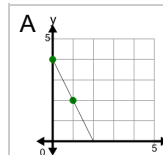
$$m = -4$$



2

What line has a slope that is
PERPENDICULAR to this
slope?

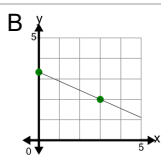
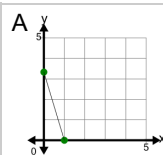
$$m = \frac{1}{4}$$



3

What line has a slope that is
PERPENDICULAR to this
slope?

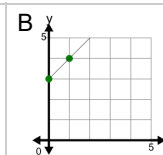
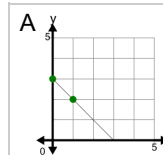
$$m = 3$$



4

What line has a slope that is
PERPENDICULAR to this
slope?

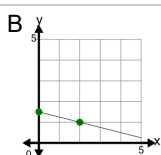
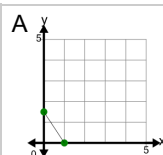
$$m = -1$$



5

What line has a slope that is
PERPENDICULAR to this
slope?

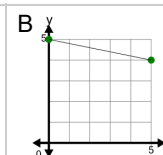
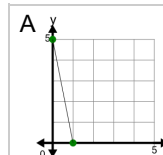
$$m = 2$$



6

What line has a slope that is
PERPENDICULAR to this
slope?

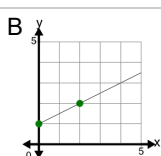
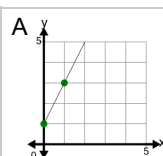
$$m = \frac{1}{5}$$



7

What line has a slope that is
PERPENDICULAR to this
slope?

$$m = -2$$



8

What line has a slope that is
PERPENDICULAR to this
slope?

$$m = 1$$

