











Statistics - Concept Intro Mean - Description to Answer

<div>1</div> <div>How many donuts would each kid have if they SHARED evenly?</div> <div></div> <div>53</div>	<div>A</div> <div>4</div> <div>D</div> <div>0</div>	<div>B</div> <div>3</div> <div>E</div> <div>5</div>	<div>C</div> <div>2</div> <div>F</div> <div>1</div>
<div>2</div> <div>How many ice creams would each kid have if they SHARED evenly?</div> <div></div> <div>31</div>	<div>A</div> <div>2</div> <div>D</div> <div>5</div>	<div>B</div> <div>3</div> <div>E</div> <div>1</div>	<div>C</div> <div>4</div> <div>F</div> <div>0</div>
<div>3</div> <div>How many oranges would each kid have if they SHARED evenly?</div> <div></div> <div>31</div>	<div>A</div> <div>4</div> <div>D</div> <div>6</div>	<div>B</div> <div>1</div> <div>E</div> <div>2</div>	<div>C</div> <div>7</div> <div>F</div> <div>3</div>
<div>4</div> <div>How many oranges would each kid have if they SHARED evenly?</div> <div></div> <div>13</div>	<div>A</div> <div>3</div> <div>D</div> <div>7</div>	<div>B</div> <div>5</div> <div>E</div> <div>2</div>	<div>C</div> <div>4</div> <div>F</div> <div>6</div>
<div>5</div> <div>How many candies would each kid have if they SHARED evenly?</div> <div></div> <div>71</div>	<div>A</div> <div>9</div> <div>D</div> <div>4</div>	<div>B</div> <div>8</div> <div>E</div> <div>5</div>	<div>C</div> <div>7</div> <div>F</div> <div>2</div>
<div>6</div> <div>How many donuts would each kid have if they SHARED evenly?</div> <div></div> <div>24</div>	<div>A</div> <div>1</div> <div>D</div> <div>0</div>	<div>B</div> <div>4</div> <div>E</div> <div>2</div>	<div>C</div> <div>8</div> <div>F</div> <div>3</div>
<div>7</div> <div>How many ice creams would each kid have if they SHARED evenly?</div> <div></div> <div>06</div>	<div>A</div> <div>1</div> <div>D</div> <div>0</div>	<div>B</div> <div>7</div> <div>E</div> <div>4</div>	<div>C</div> <div>3</div> <div>F</div> <div>2</div>
<div>8</div> <div>How many candies would each kid have if they SHARED evenly?</div> <div></div> <div>13</div>	<div>A</div> <div>2</div> <div>D</div> <div>3</div>	<div>B</div> <div>0</div> <div>E</div> <div>6</div>	<div>C</div> <div>7</div> <div>F</div> <div>4</div>