




Statistics - Concept Intro Mean - Term to Answer

**1**

What is the MEAN (average) number of donuts per kid?



7 1 7

A

3

B

7

C

5

D

1

E


6

F

0

2

What is the MEAN (average) number of candies per kid?



6 0 3

A

7

B

3

C

1

D

6

E


0

F

2

3

What is the MEAN (average) number of apples per kid?



4 5 6

A

1

B

7

C

4

D

5

E


2

F

3

4

What is the MEAN (average) number of donuts per kid?



7 0 2

A

0

B

7

C

2

D

1

E


5

F

3

5

What is the MEAN (average) number of oranges per kid?



2 4 6

A

7

B

2

C

3

D

0

E


4

F

1

6

What is the MEAN (average) number of apples per kid?



0 4 5

A

1

B

4

C

8

D

0

E


3

F

2

7

What is the MEAN (average) number of oranges per kid?



5 0 7

A

7

B

5

C

4

D

6

E


1

F

2

8

What is the MEAN (average) number of ice creams per kid?



1 6 2

A

6

B

1

C

5

D

4

E

3

F

2