


Statistics - Concept Intro Median - Term to Answer

1

What is the MEDIAN number of candies among the kids?




5 4 4

A	B	C
0	4	1
D	E	F
9	2	3

2

What is the MEDIAN number of apples among the kids?




6 1 6

A	B	C
2	6	8
D	E	F
0	10	11

3

What is the MEDIAN number of ice creams among the kids?




2 6 6

A	B	C
6	9	0
D	E	F
11	7	3

4

What is the MEDIAN number of ice creams among the kids?




1 6 7

A	B	C
11	3	10
D	E	F
4	6	1

5

What is the MEDIAN number of oranges among the kids?




1 2 5

A	B	C
5	2	4
D	E	F
7	6	1

6

What is the MEDIAN number of apples among the kids?




6 1 4

A	B	C
1	6	9
D	E	F
4	2	3

7

What is the MEDIAN number of ice creams among the kids?




7 3 5

A	B	C
9	1	3
D	E	F
8	0	5

8

What is the MEDIAN number of donuts among the kids?



3 3 3

A	B	C
5	3	2
D	E	F
8	0	6