


Statistics - Concept Intro Mode - Description to Answer


1 What number of apples occurs most OFTEN?



6 4 3 6

A	B	C
4	3	11
D	E	F
6	0	9


2 What number of oranges occurs most OFTEN?



5 4 7 5

A	B	C
5	4	1
D	E	F
2	3	6


3 What number of oranges occurs most OFTEN?



4 3 4 2

A	B	C
4	3	2
D	E	F
9	1	6


4 What number of apples occurs most OFTEN?



4 7 2 7

A	B	C
9	11	5
D	E	F
4	3	7

5 What number of oranges occurs most OFTEN?



5 5 5 6

A	B	C
7	10	3
D	E	F
5	8	6


6 What number of ice creams occurs most OFTEN?



6 6 5 2

A	B	C
0	5	6
D	E	F
11	8	9


7 What number of ice creams occurs most OFTEN?



3 2 2 7

A	B	C
5	2	1
D	E	F
0	4	3

8 What number of ice creams occurs most OFTEN?



5 7 7 1

A	B	C
7	8	6
D	E	F
9	2	1