




Statistics - Concept Intro Mode - Description to Answer


1 What number of apples occurs most OFTEN?



4 3 7 3

A	B	C
4	3	7
D	E	F
2	6	5


3 What number of apples occurs most OFTEN?



5 4 5 7

A	B	C
5	3	8
D	E	F
4	1	10


5 What number of ice creams occurs most OFTEN?



5 7 4 4

A	B	C
6	2	1
D	E	F
5	0	4


7 What number of donuts occurs most OFTEN?



5 6 5 4

A	B	C
3	1	10
D	E	F
8	5	6


2 What number of ice creams occurs most OFTEN?



4 7 4 5

A	B	C
7	4	0
D	E	F
8	5	6


4 What number of ice creams occurs most OFTEN?



7 5 6 5

A	B	C
5	1	10
D	E	F
6	4	0


6 What number of ice creams occurs most OFTEN?



3 6 4 6

A	B	C
1	7	11
D	E	F
6	2	9

8 What number of oranges occurs most OFTEN?



3 5 5 7

A	B	C
5	6	3
D	E	F
1	8	7