




Statistics - Concept Intro Range - Term to Answer

**1**

What is the RANGE of the number of apples among the kids?



5 6 4

A

5

B

2

C

6

D

1

E


3

F

4

2

What is the RANGE of the number of donuts among the kids?



5 7 5

A

7

B

1

C

3

D

4

E


5

F

2

3

What is the RANGE of the number of donuts among the kids?



4 1 5

A

5

B

9

C

3

D

1

E


2

F

4

4

What is the RANGE of the number of ice creams among the kids?



7 4 4

A

3

B

7

C

6

D

2

E


1

F

8

5

What is the RANGE of the number of candies among the kids?



7 1 3

A

5

B

7

C

0

D

6

E


3

F

4

6

What is the RANGE of the number of apples among the kids?



3 5 5

A

1

B

3

C

6

D

7

E


2

F

4

7

What is the RANGE of the number of ice creams among the kids?



5 1 3

A

1

B

9

C

7

D

8

E


4

F

2

8

What is the RANGE of the number of apples among the kids?



7 6 7

A

0

B

5

C

6

D

2

E

3

F

1