





Statistics - Concept Intro Range - Term to Answer



1

What is the RANGE of the number of candies among the kids?




4 7 1 4

A	B	C
7	9	11
D	E	F
3	1	6

2

What is the RANGE of the number of apples among the kids?




7 6 5 2

A	B	C
5	6	2
D	E	F
10	8	9

3

What is the RANGE of the number of apples among the kids?




5 2 3 2

A	B	C
2	5	0
D	E	F
3	1	4

4

What is the RANGE of the number of oranges among the kids?




6 6 4 3

A	B	C
4	3	2
D	E	F
5	1	8

5

What is the RANGE of the number of ice creams among the kids?




2 7 3 6

A	B	C
0	1	6
D	E	F
5	4	2

6

What is the RANGE of the number of candies among the kids?




4 5 3 3

A	B	C
0	5	4
D	E	F
2	1	3

7

What is the RANGE of the number of apples among the kids?




4 6 4 6

A	B	C
1	3	4
D	E	F
5	7	2

8

What is the RANGE of the number of apples among the kids?



2 6 6 3

A	B	C
2	8	9
D	E	F
4	7	0