
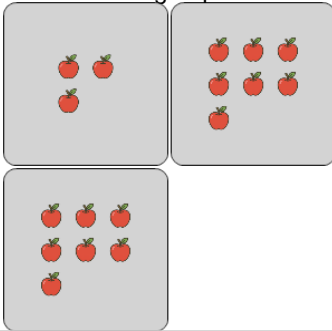




Statistics - Median - Pictures to Correct Term

**1**

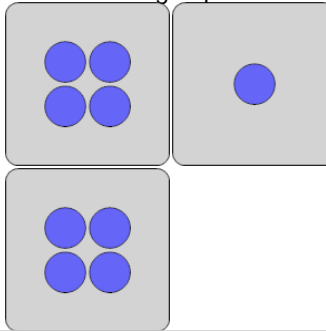
What is the MEDIAN number of apples in a group?



A	B	C
12	9	11
D	E	F
7	2	6

2

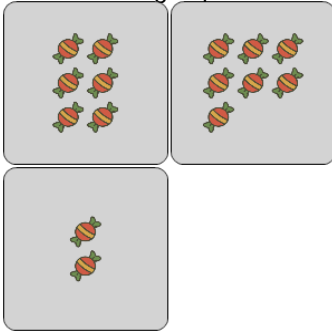
What is the MEDIAN number of circles in a group?



A	B	C
7	5	8
D	E	F
3	2	4

3

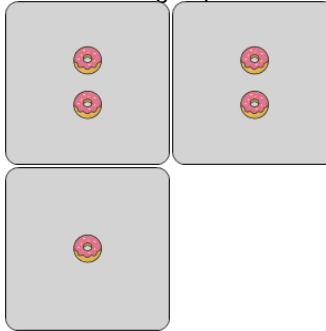
What is the MEDIAN number of candies in a group?



A	B	C
0	10	6
D	E	F
7	8	11

4

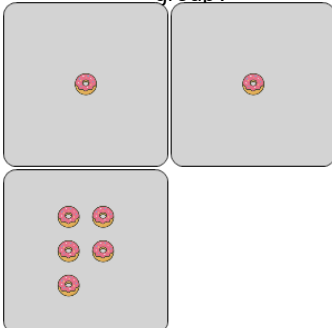
What is the MEDIAN number of donuts in a group?



A	B	C
0	7	6
D	E	F
1	4	2

5

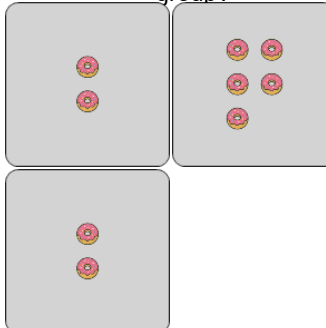
What is the MEDIAN number of donuts in a group?



A	B	C
6	4	0
D	E	F
5	1	2

6


What is the MEDIAN number of donuts in a group?



A	B	C
1	0	3
D	E	F
4	6	2

7

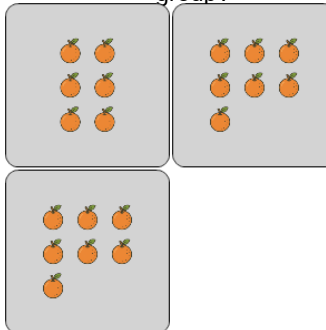
What is the MEDIAN number of ice creams in a group?



A	B	C
6	5	2
D	E	F
1	3	8

8

What is the MEDIAN number of oranges in a group?



A	B	C
6	10	1
D	E	F
7	9	2