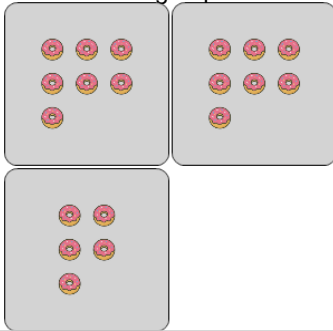




Statistics - Median - Pictures to Correct Term

**1**

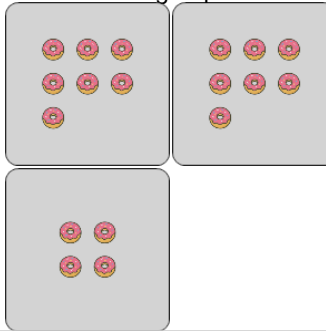
What is the MEDIAN number of donuts in a group?



A	B	C
10	7	5
D	E	F
11	3	6

2

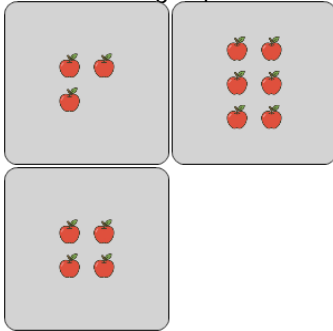
What is the MEDIAN number of donuts in a group?



A	B	C
11	7	9
D	E	F
12	8	6

3

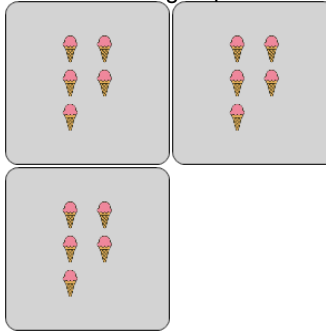
What is the MEDIAN number of apples in a group?



A	B	C
8	3	6
D	E	F
1	4	2

4

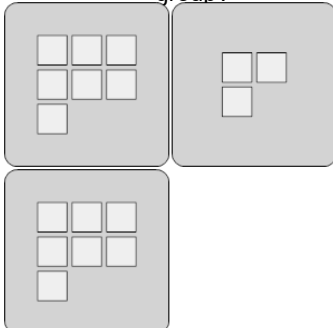
What is the MEDIAN number of ice creams in a group?



A	B	C
0	9	2
D	E	F
5	1	10

5

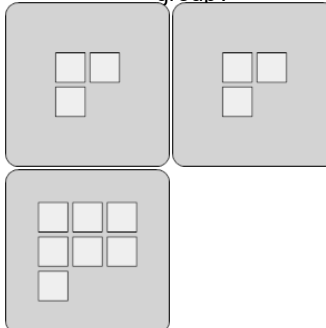
What is the MEDIAN number of squares in a group?



A	B	C
7	10	4
D	E	F
9	11	8

6

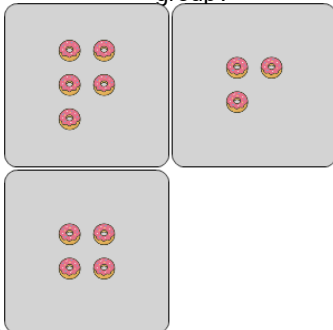
What is the MEDIAN number of squares in a group?



A	B	C
5	8	6
D	E	F
3	1	4

7


What is the MEDIAN number of donuts in a group?



A	B	C
6	8	9
D	E	F
0	4	2

8

What is the MEDIAN number of apples in a group?



A	B	C
10	1	8
D	E	F
0	5	4