
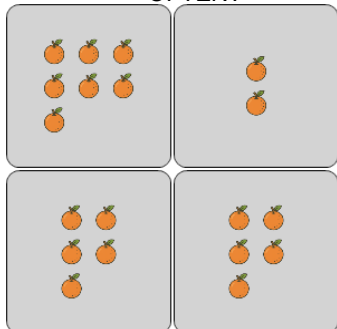




Statistics - Mode - Pictures to Concept

**1**

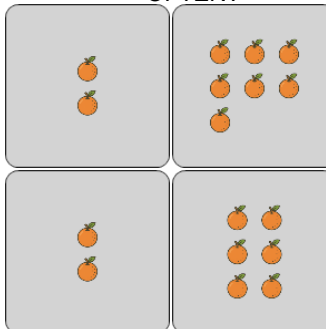
What number of oranges occurs most OFTEN?



A	B	C
2	1	10
D	E	F
0	5	7

2

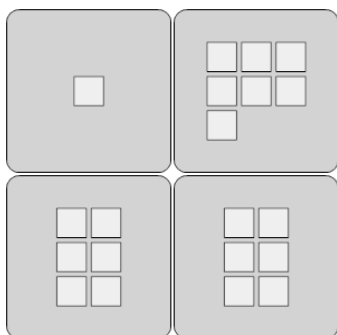
What number of oranges occurs most OFTEN?



A	B	C
7	1	4
D	E	F
2	0	3

3

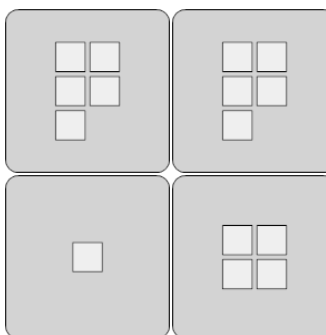
What number of squares occurs most OFTEN?



A	B	C
7	8	6
D	E	F
11	0	10

4

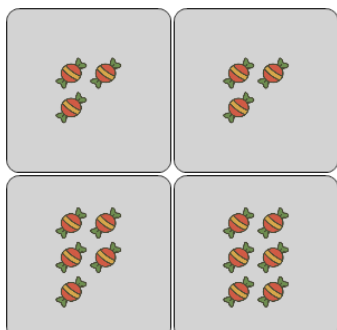
What number of squares occurs most OFTEN?



A	B	C
5	1	7
D	E	F
8	10	4

5


What number of candies occurs most OFTEN?



A	B	C
2	5	3
D	E	F
1	0	6

6


What number of ice creams occurs most OFTEN?



A	B	C
5	1	9
D	E	F
2	8	7

7


What number of ice creams occurs most OFTEN?



A	B	C
1	11	6
D	E	F
3	9	7

8

What number of oranges occurs most OFTEN?



A	B	C
2	4	3
D	E	F
0	7	5