
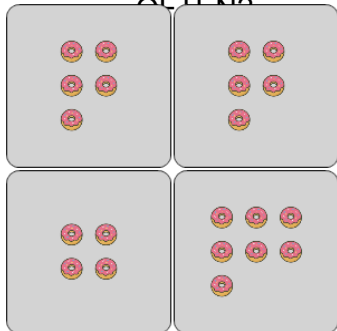




## Statistics - Mode - Pictures to Concept

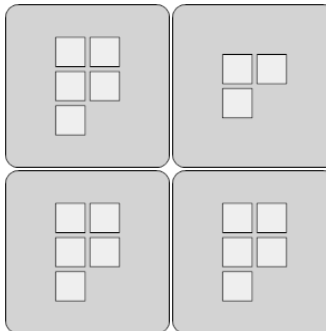


**1** What number of donuts occurs most OFTEN?



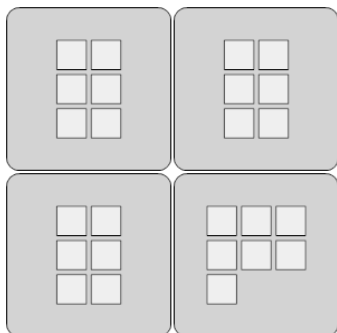
A	B	C
0	8	5
D	E	F
3	4	6

**2** What number of squares occurs most OFTEN?




A	B	C
1	0	10
D	E	F
9	3	5

**3** What number of squares occurs most OFTEN?



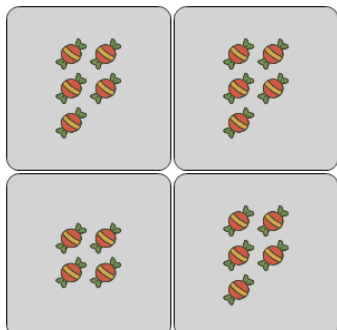
A	B	C
0	6	4
D	E	F
3	9	5

**4** What number of ice creams occurs most OFTEN?



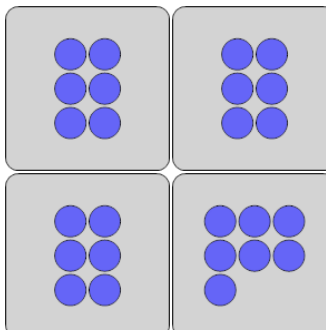
A	B	C
1	5	4
D	E	F
0	6	2

**5** What number of candies occurs most OFTEN?



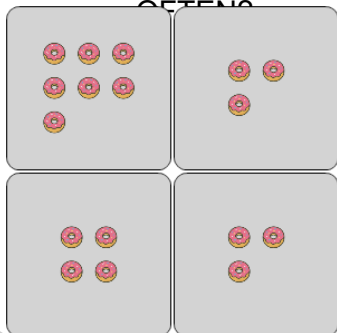
A	B	C
0	2	4
D	E	F
5	6	1

**6** What number of circles occurs most OFTEN?



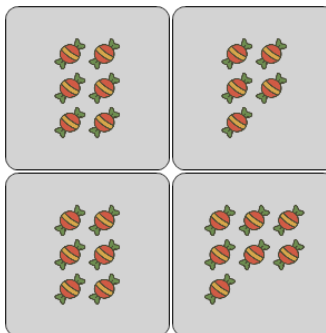
A	B	C
1	6	8
D	E	F
3	11	9

**7** What number of donuts occurs most OFTEN?



A	B	C
1	0	6
D	E	F
3	2	7

**8** What number of candies occurs most OFTEN?



A	B	C
11	3	0
D	E	F
6	5	2