


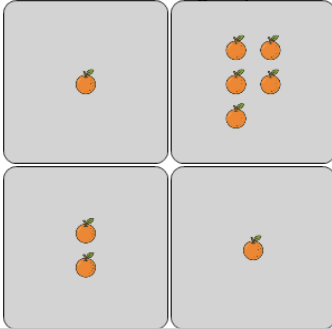


Statistics - Mode - Pictures to Correct Term



1

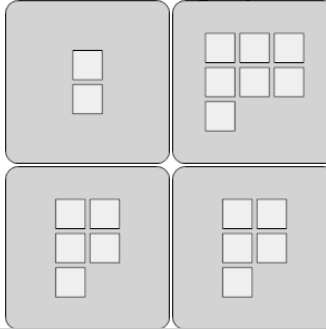
What is the MODE of the number of oranges in each group?



A	B	C
0	2	3
D	E	F
5	6	1

2


What is the MODE of the number of squares in each group?



A	B	C
9	4	5
D	E	F
2	10	1

3

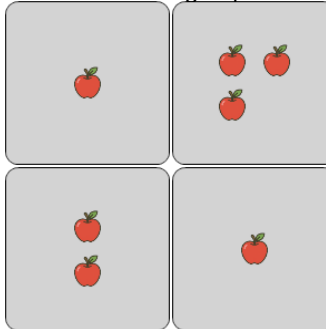
What is the MODE of the number of ice creams in each group?



A	B	C
3	5	9
D	E	F
4	1	7

4


What is the MODE of the number of apples in each group?



A	B	C
1	4	3
D	E	F
5	2	0

5

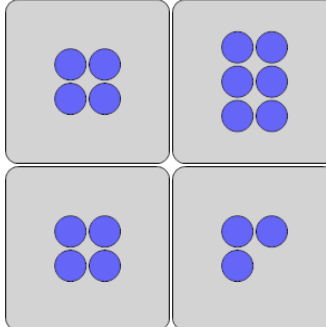
What is the MODE of the number of ice creams in each group?



A	B	C
2	7	1
D	E	F
4	0	5

6


What is the MODE of the number of circles in each group?



A	B	C
2	1	0
D	E	F
4	9	6

7

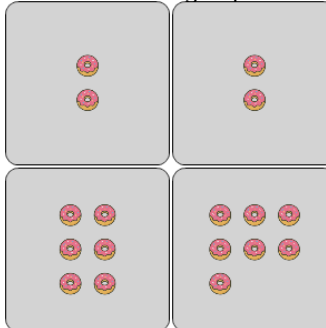
What is the MODE of the number of squares in each group?



A	B	C
9	11	5
D	E	F
8	7	12

8

What is the MODE of the number of donuts in each group?



A	B	C
7	3	4
D	E	F
2	1	5