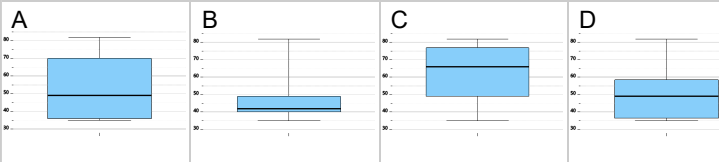


## Statistics - Quartiles - Data Set (No Outliers) to Box Plot

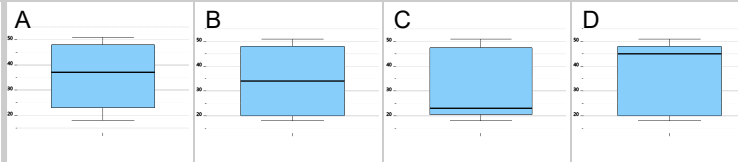
<sup>1</sup> 35, 36, 37, 48, 50, 50, 67, 82

Which box plot represents this data set?



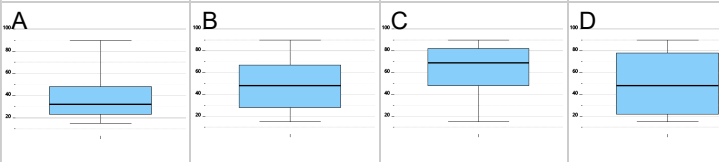
<sup>2</sup> 18, 19, 22, 22, 23, 29, 45, 50, 51

Which box plot represents this data set?



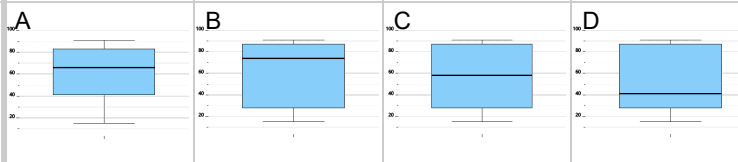
<sup>3</sup> 15, 25, 31, 39, 48, 63, 63, 71, 90

Which box plot represents this data set?



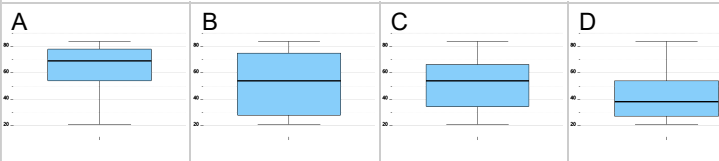
<sup>4</sup> 15, 17, 28, 28, 35, 47, 55, 87, 88, 91

Which box plot represents this data set?



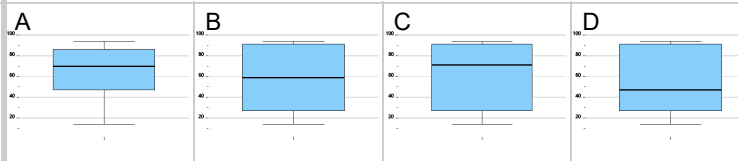
<sup>5</sup> 21, 31, 38, 49, 59, 60, 73, 84

Which box plot represents this data set?



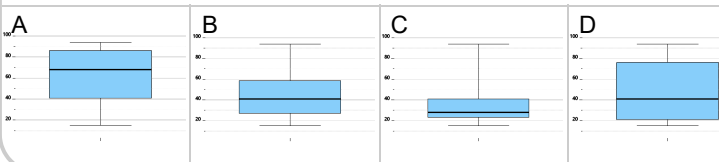
<sup>6</sup> 14, 24, 30, 30, 47, 70, 90, 92, 94

Which box plot represents this data set?



<sup>7</sup> 15, 21, 33, 38, 41, 42, 55, 62, 94

Which box plot represents this data set?



<sup>8</sup> 16, 17, 28, 44, 51, 59, 60, 83, 85, 86

Which box plot represents this data set?

