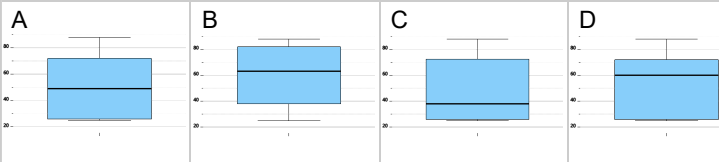


## Statistics - Quartiles - Data Set (No Outliers) to Box Plot

1 78, 25, 67, 27, 88, 25, 33, 43

Which box plot represents this data set?



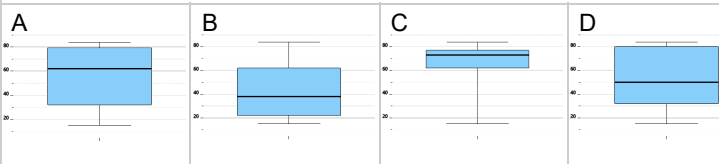
2 17, 60, 39, 23, 59, 32, 67, 18

Which box plot represents this data set?



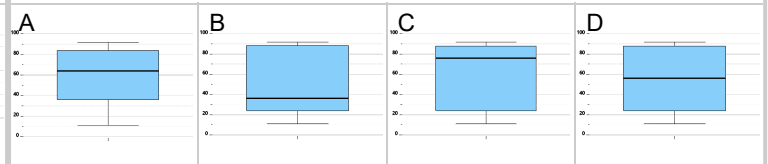
3 84, 15, 18, 62, 55, 46, 82, 77, 73

Which box plot represents this data set?



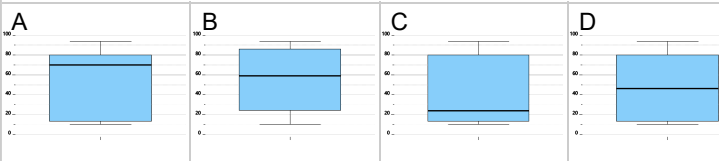
4 11, 88, 89, 36, 20, 56, 28, 92, 35

Which box plot represents this data set?



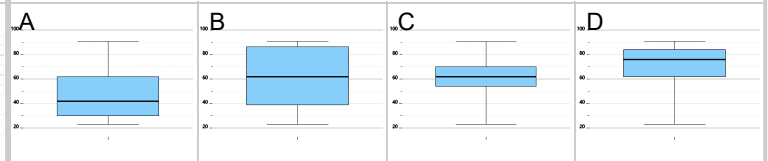
5 28, 13, 10, 94, 19, 24, 11, 81, 23, 80

Which box plot represents this data set?



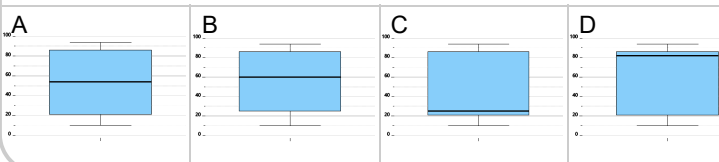
6 89, 82, 50, 62, 55, 23, 91, 84, 28

Which box plot represents this data set?



7 25, 25, 85, 21, 87, 10, 21, 94

Which box plot represents this data set?



8 21, 27, 39, 46, 36, 48, 10, 35, 75, 64

Which box plot represents this data set?

