

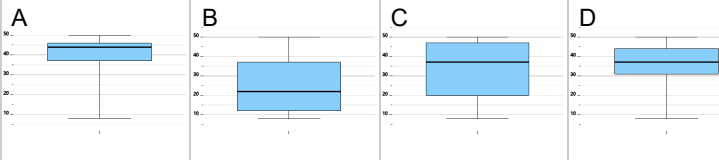


## Statistics - Quartiles - Data Set (With Outliers) to Box Plot



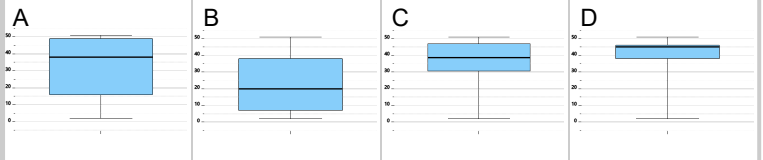
1 8, 31, 31, 33, 41, 42, 46, 50

Which box plot represents this data set?



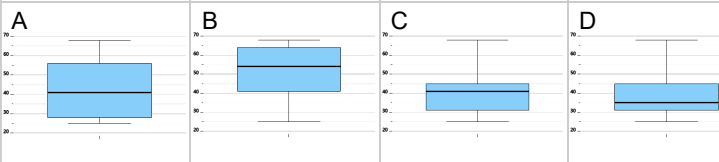
2 2, 29, 32, 36, 41, 47, 47, 51

Which box plot represents this data set?



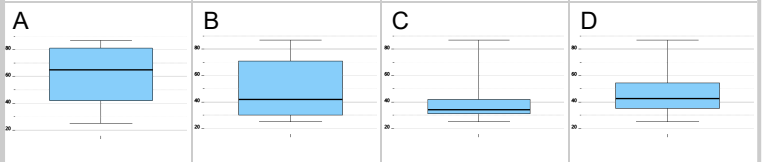
3 25, 30, 32, 41, 41, 42, 44, 46, 68

Which box plot represents this data set?



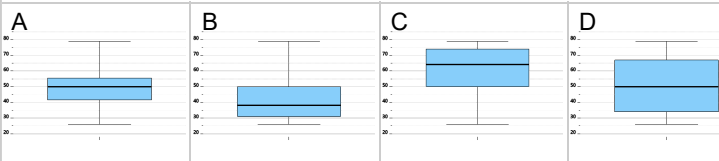
4 25, 30, 40, 41, 44, 51, 58, 87

Which box plot represents this data set?



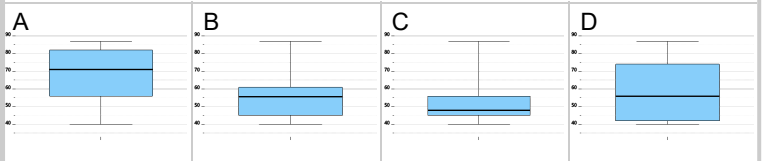
5 26, 41, 42, 48, 50, 51, 55, 56, 79

Which box plot represents this data set?



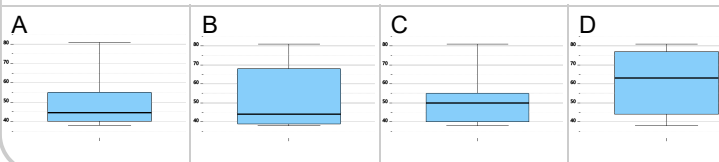
6 40, 43, 47, 54, 57, 59, 63, 87

Which box plot represents this data set?



7 38, 39, 40, 40, 40, 49, 54, 55, 66, 81

Which box plot represents this data set?



8 1, 25, 29, 33, 34, 40, 46, 49

Which box plot represents this data set?

