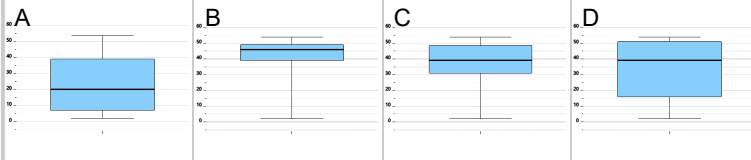


Statistics - Quartiles - Data Set (With Outliers) to Box Plot

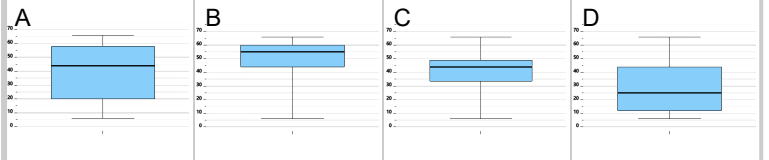
¹ 52, 45, 27, 35, 54, 39, 40, 35, 2

Which box plot represents this data set?



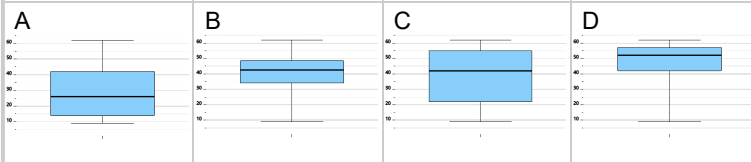
² 48, 31, 66, 46, 36, 6, 50, 44, 40

Which box plot represents this data set?



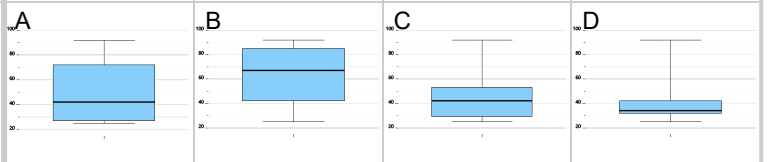
³ 48, 33, 49, 35, 9, 37, 48, 62

Which box plot represents this data set?



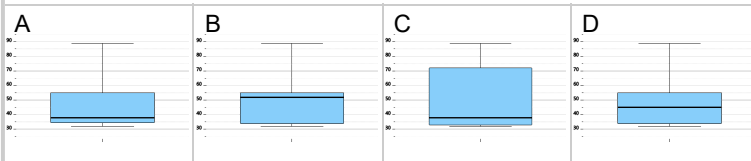
⁴ 43, 50, 34, 25, 25, 56, 39, 92, 42

Which box plot represents this data set?



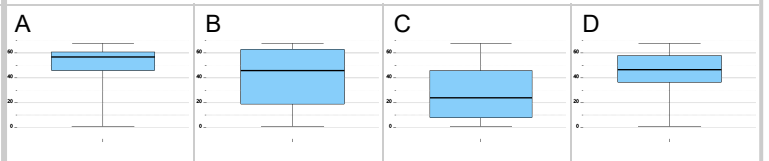
⁵ 51, 54, 36, 32, 89, 33, 56, 38, 38

Which box plot represents this data set?



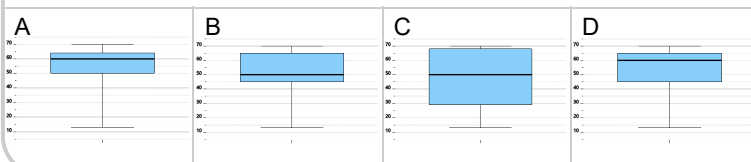
⁶ 48, 68, 36, 37, 1, 45, 49, 67

Which box plot represents this data set?



⁷ 50, 65, 13, 50, 44, 56, 50, 70, 68, 45

Which box plot represents this data set?



⁸ 80, 51, 46, 36, 31, 36, 38, 29, 28

Which box plot represents this data set?

