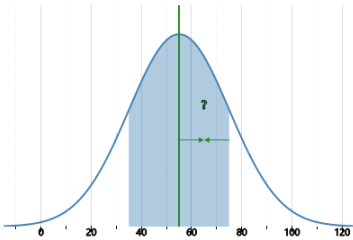




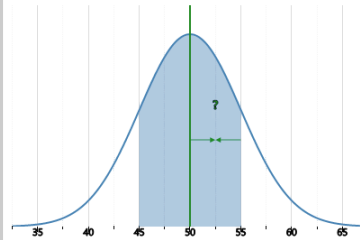
Statistics - Standard Deviation - Bell Curve to Mean

1 What is the mean of this bell curve?



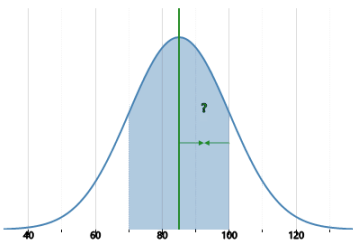
- | | | |
|----|----|----|
| A | B | C |
| 75 | 20 | 35 |
| D | | |
| 55 | | |

2 What is the mean of this bell curve?



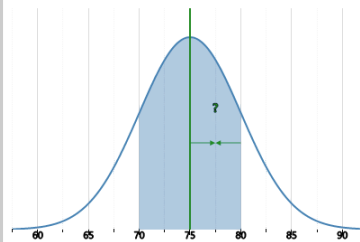
- | | | |
|----|----|----|
| A | B | C |
| 5 | 55 | 45 |
| D | | |
| 50 | | |

3 What is the mean of this bell curve?



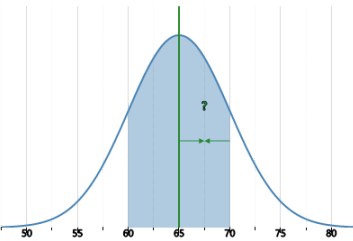
- | | | |
|----|-----|----|
| A | B | C |
| 15 | 100 | 70 |
| D | | |
| 85 | | |

4 What is the mean of this bell curve?



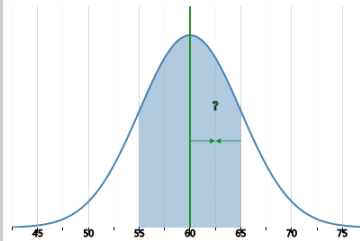
- | | | |
|----|----|----|
| A | B | C |
| 70 | 80 | 75 |
| D | | |
| 5 | | |

5 What is the mean of this bell curve?



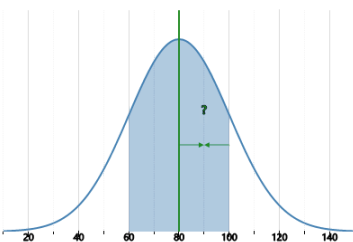
- | | | |
|----|----|----|
| A | B | C |
| 5 | 70 | 60 |
| D | | |
| 65 | | |

6 What is the mean of this bell curve?



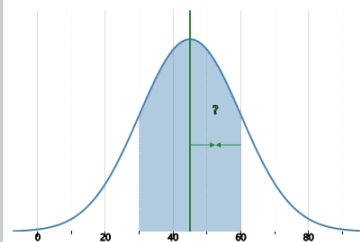
- | | | |
|----|---|----|
| A | B | C |
| 60 | 5 | 55 |
| D | | |
| 65 | | |

7 What is the mean of this bell curve?



- | | | |
|-----|----|----|
| A | B | C |
| 20 | 80 | 60 |
| D | | |
| 100 | | |

8 What is the mean of this bell curve?



- | | | |
|----|----|----|
| A | B | C |
| 30 | 15 | 45 |
| D | | |
| 60 | | |