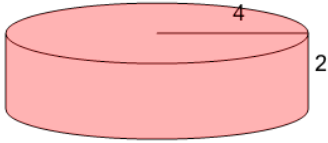
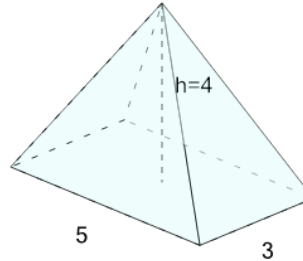


**1**

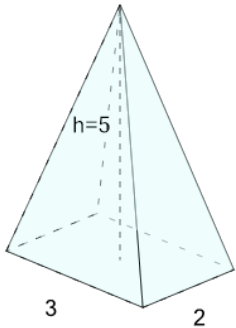
What is the surface area of this Cylinder?

A	B
152.15	150.8

**2**

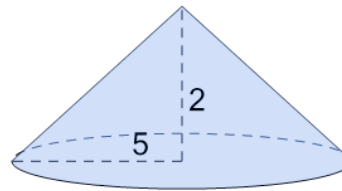
What is the surface area of this Rectangular Pyramid?

A	B
59.21	61.21

**3**

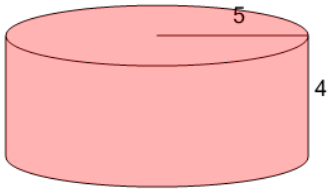
What is the surface area of this Rectangular Pyramid?

A	B
34.82	33.82

**4**

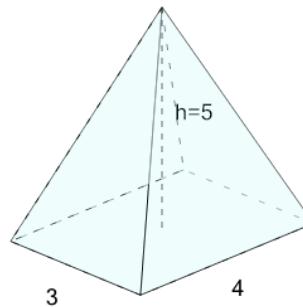
What is the surface area of this Cone?

A	B
167.18	163.13

**5**

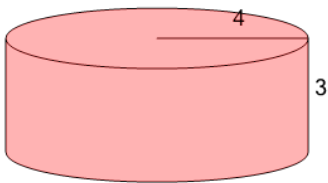
What is the surface area of this Cylinder?

A	B
282.74	281.39

**6**

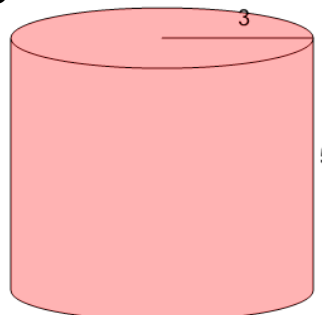
What is the surface area of this Rectangular Pyramid?

A	B
54.53	57.53

**7**

What is the surface area of this Cylinder?

A	B
173.23	175.93

**8**

What is the surface area of this Cylinder?

A	B
150.8	148.1