
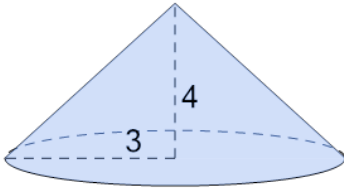


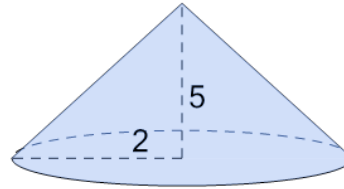


Surface Area - Cone - Image to Decimal

**1**

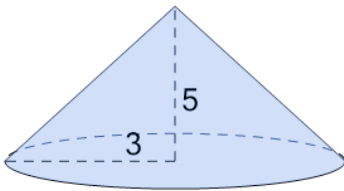
What is the surface area of this Cone?

| A | B |
|------|------|
| 75.4 | 78.1 |

2

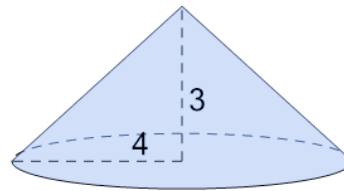
What is the surface area of this Cone?

| A | B |
|------|------|
| 49.1 | 46.4 |

3

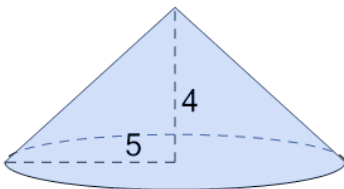
What is the surface area of this Cone?

| A | B |
|-------|-------|
| 87.28 | 83.23 |

4

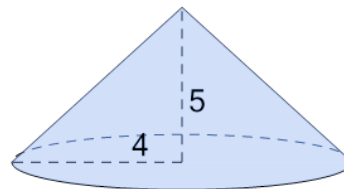
What is the surface area of this Cone?

| A | B |
|--------|-------|
| 114.45 | 113.1 |

5

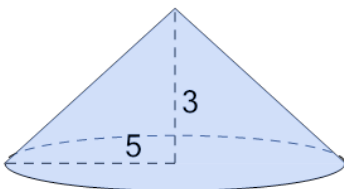
What is the surface area of this Cone?

| A | B |
|--------|--------|
| 179.12 | 180.47 |

6

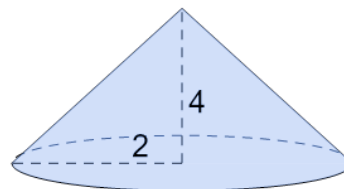
What is the surface area of this Cone?

| A | B |
|--------|--------|
| 134.78 | 130.73 |

7

What is the surface area of this Cone?

| A | B |
|--------|--------|
| 168.78 | 170.13 |

8

What is the surface area of this Cone?

| A | B |
|-------|-------|
| 44.72 | 40.67 |