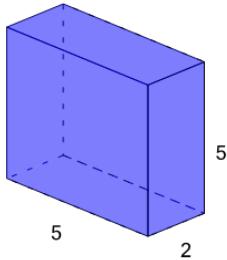


Surface Area of a Rectangular Prism - Calculate

1

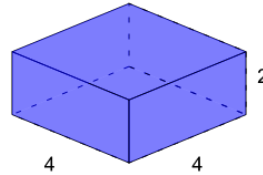
What is the surface area of this Rectangular Prism?



A	B	C
54	36	90
D	E	F
126	162	144

2

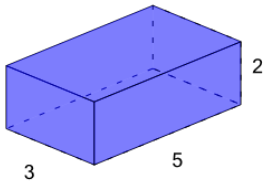
What is the surface area of this Rectangular Prism?



A	B	C
58	10	28
D	E	F
82	64	100

3

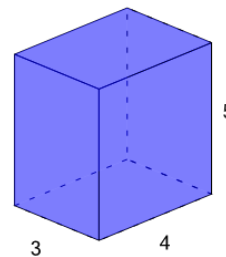
What is the surface area of this Rectangular Prism?



A	B	C
44	62	50
D	E	F
26	86	20

4

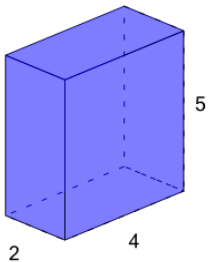
What is the surface area of this Rectangular Prism?



A	B	C
121	4	112
D	E	F
94	76	157

5

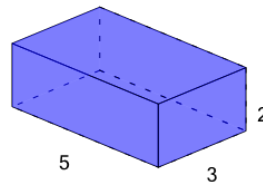
What is the surface area of this Rectangular Prism?



A	B	C
55	27	62
D	E	F
83	76	34

6

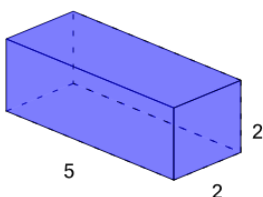
What is the surface area of this Rectangular Prism?



A	B	C
20	2	116
D	E	F
62	92	98

7

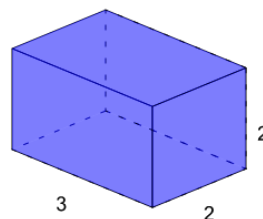
What is the surface area of this Rectangular Prism?



A	B	C
48	36	44
D	E	F
32	84	8

8

What is the surface area of this Rectangular Prism?



A	B	C
26	32	11
D	E	F
59	23	44