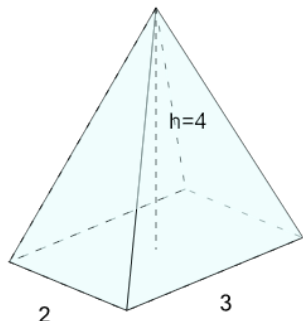


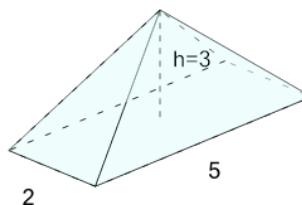


## Surface Area - Rectangular Prism - Image to Decimal

**1**

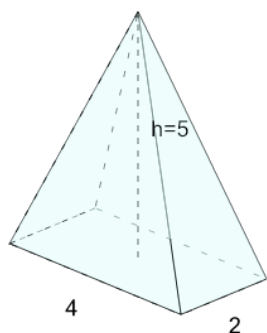
What is the surface area of this Rectangular Pyramid?

A	B
27.42	29.42

**2**

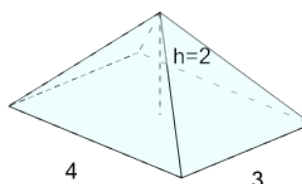
What is the surface area of this Rectangular Pyramid?

A	B
36.69	39.69

**3**

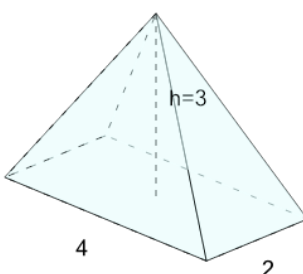
What is the surface area of this Rectangular Pyramid?

A	B
44.35	42.35

**4**

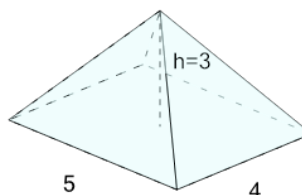
What is the surface area of this Rectangular Pyramid?

A	B
42.84	39.84

**5**

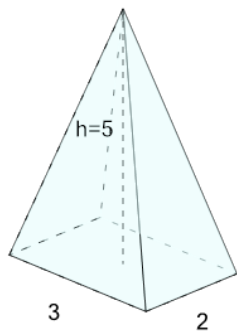
What is the surface area of this Rectangular Pyramid?

A	B
30.42	32.42

**6**

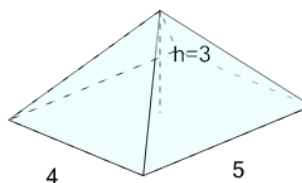
What is the surface area of this Rectangular Pyramid?

A	B
70.32	68.32

**7**

What is the surface area of this Rectangular Pyramid?

A	B
33.82	30.82

**8**

What is the surface area of this Rectangular Pyramid?

A	B
68.32	69.32