
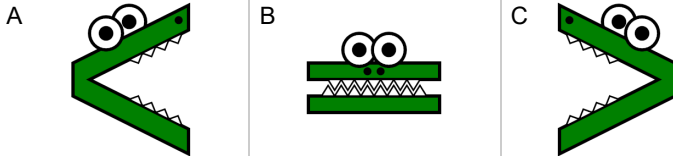
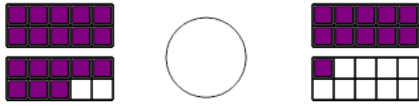




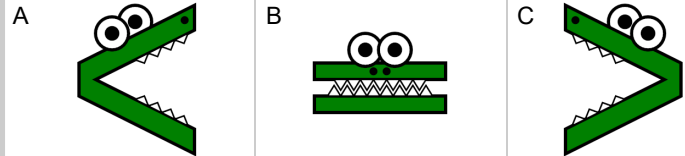
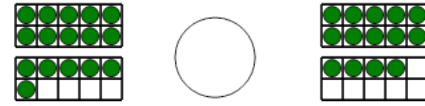
Ten Groups - Compare, Less than 20 - to Alligator



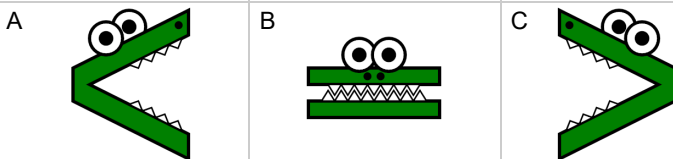
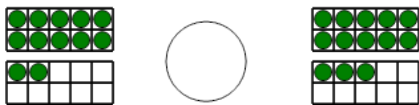
1 Which way would the alligator face to eat the largest number of shapes?



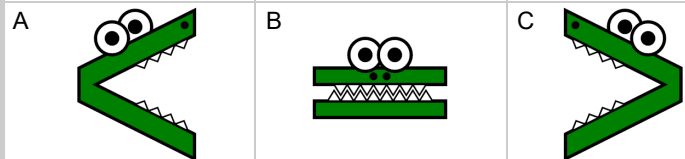

2 Which way would the alligator face to eat the largest number of shapes?



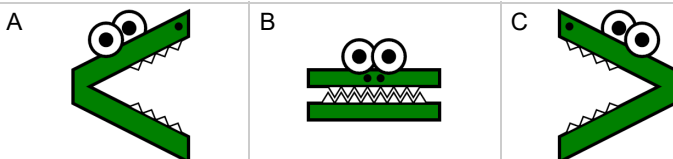
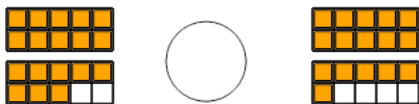
3 Which way would the alligator face to eat the largest number of shapes?



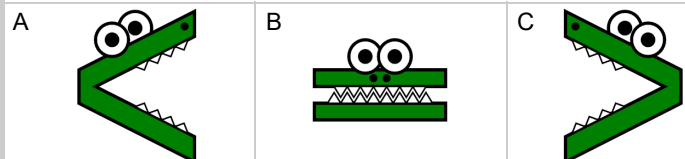

4 Which way would the alligator face to eat the largest number of shapes?



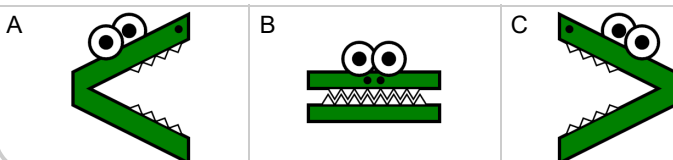
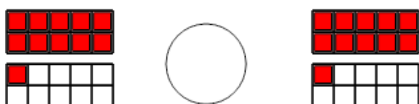
5 Which way would the alligator face to eat the largest number of shapes?



6 Which way would the alligator face to eat the largest number of shapes?



7 Which way would the alligator face to eat the largest number of shapes?



8 Which way would the alligator face to eat the largest number of shapes?

