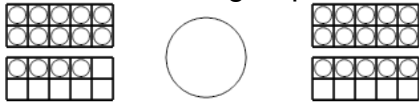




## Ten Groups - Compare, Less than 20 - to Symbol



**1** Is the first ten group less than, greater than, or equal to the second ten group?



A

&lt;

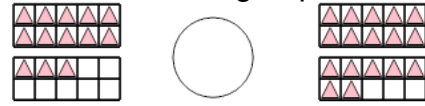
B

=

C

&gt;

**2** Is the first ten group less than, greater than, or equal to the second ten group?



A

&lt;

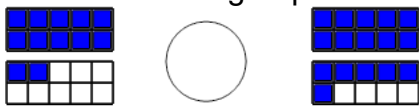
B

=

C

&gt;

**3** Is the first ten group less than, greater than, or equal to the second ten group?



A

&lt;

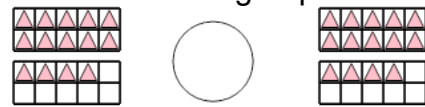
B

=

C

&gt;

**4** Is the first ten group less than, greater than, or equal to the second ten group?



A

&lt;

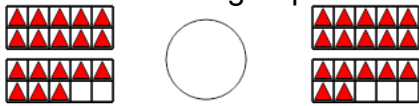
B

=

C

&gt;

**5** Is the first ten group less than, greater than, or equal to the second ten group?



A

&lt;

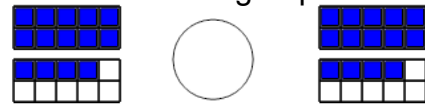
B

=

C

&gt;

**6** Is the first ten group less than, greater than, or equal to the second ten group?



A

&lt;

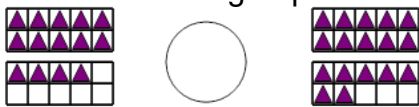
B

=

C

&gt;

**7** Is the first ten group less than, greater than, or equal to the second ten group?



A

&lt;

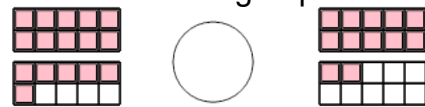
B

=

C

&gt;

**8** Is the first ten group less than, greater than, or equal to the second ten group?



A

&lt;

B

=

C

&gt;