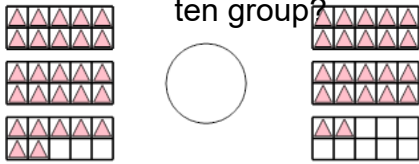




Ten Groups - Compare, Less than 30 - to Symbol



1 Is the first ten group less than, greater than, or equal to the second ten group?



A

<

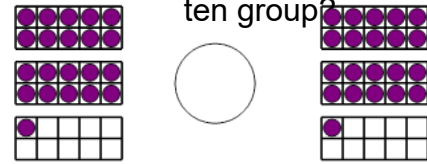
B

=

C

>

2 Is the first ten group less than, greater than, or equal to the second ten group?



A

<

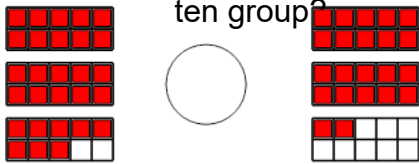
B

=

C

>

3 Is the first ten group less than, greater than, or equal to the second ten group?



A

<

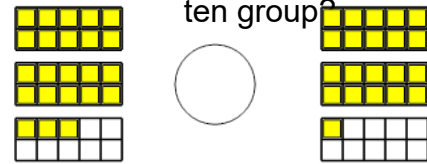
B

=

C

>

4 Is the first ten group less than, greater than, or equal to the second ten group?



A

<

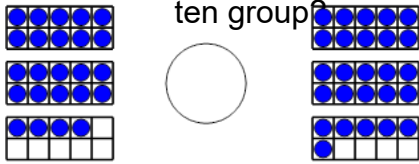
B

=

C

>

5 Is the first ten group less than, greater than, or equal to the second ten group?



A

<

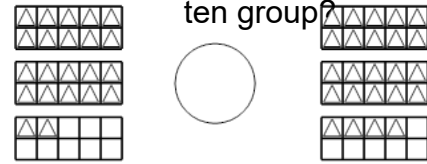
B

=

C

>

6 Is the first ten group less than, greater than, or equal to the second ten group?



A

<

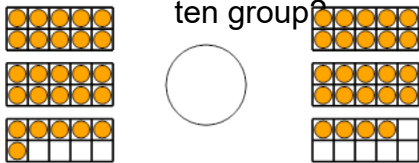
B

=

C

>

7 Is the first ten group less than, greater than, or equal to the second ten group?



A

<

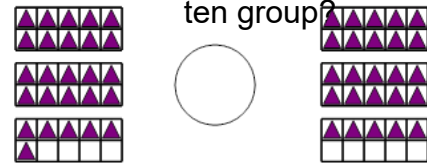
B

=

C

>

8 Is the first ten group less than, greater than, or equal to the second ten group?



A

<

B

=

C

>