
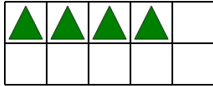




Ten Groups - Count, Less than 10

**1**

Find the total number of green triangles



A

5

B

4

C

1

D

13

E

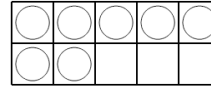
9

F

3

2

Find the total number of white circles



A

2

B

7

C

1

D

10

E

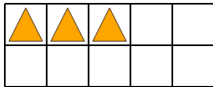
16

F

8

3

Find the total number of orange triangles



A

2

B

3

C

6

D

1

E

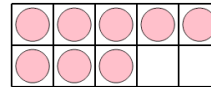
12

F

8

4

Find the total number of pink circles



A

3

B

4

C

8

D

14

E


6

F

9

5

Find the total number of purple squares



A

6

B

4

C

2

D

7

E

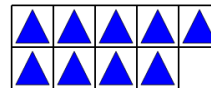
5

F

3

6

Find the total number of blue triangles



A

9

B

3

C

8

D

16

E

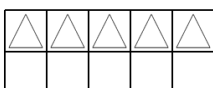
11

F

14

7

Find the total number of white triangles



A

13

B

7

C

8

D

4

E

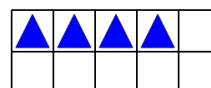
10

F

5

8

Find the total number of blue triangles



A

10

B

9

C

6

D

4

E

3

F

2