





Ten Groups - To Next Ten, One Digit, Less than 20



1


How many more yellow triangles are needed to have 20



A	B	C
1	3	2
D	E	F
8	4	7

2

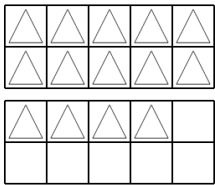
How many more green squares are needed to have 20



A	B	C
3	8	2
D	E	F
4	6	7

3

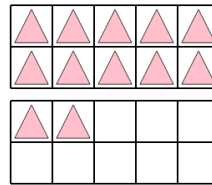
How many more white triangles are needed to have 20



A	B	C
2	3	1
D	E	F
6	4	

4

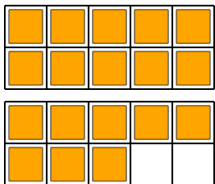
How many more pink triangles are needed to have 20



A	B	C
3	8	6
D	E	F
1	10	9

5


How many more orange squares are needed to have 20



A	B	C
6	4	9
D	E	F
8	2	3

6

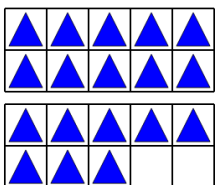
How many more purple squares are needed to have 20



A	B	C
2	11	10
D	E	F
3	8	6

7

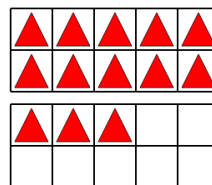
How many more blue triangles are needed to have 20



A	B	C
1	10	2
D	E	F
7	9	5

8

How many more red triangles are needed to have 20



A	B	C
7	11	5
D	E	F
16	3	1