




## Ten Groups - To Next Ten, One Digit, Less than 30

**1**


How many more orange squares are needed to have 30



A	B	C
6	12	3
D	E	F
2	4	5

**2**

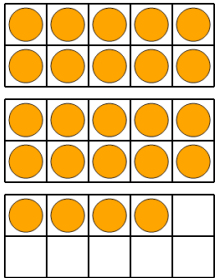
How many more red circles are needed to have 30



A	B	C
2	7	5
D	E	F
4	16	10

**3**

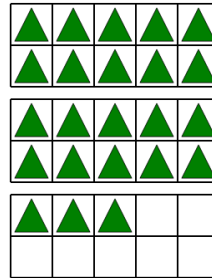
How many more orange circles are needed to have 30



A	B	C
15	10	6
D	E	F
5	14	7

**4**


How many more green triangles are needed to have 30



A	B	C
7	4	8
D	E	F
11	1	14

**5**


How many more blue circles are needed to have 30



A	B	C
3	4	1
D	E	F
5	10	2

**6**

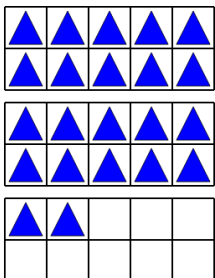
How many more yellow triangles are needed to have 30



A	B	C
5	9	11
D	E	F
18	4	10

**7**


How many more blue triangles are needed to have 30



A	B	C
8	11	2
D	E	F
4	13	14

**8**

How many more red circles are needed to have 30



A	B	C
4	2	6
D	E	F
9	12	5