


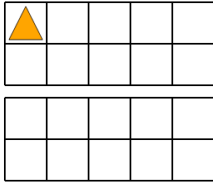


## Ten Groups - To Next Ten, Two Digits, Less than 20



**1**

How many more orange triangles are needed to have 20



A

25

B

27

C

15

D

13

E

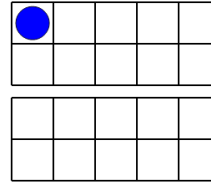
24

F

19

**2**

How many more blue circles are needed to have 20



A

19

B

18

C

15

D

14

E

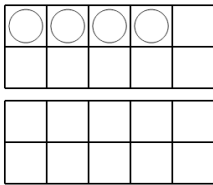
21

F

20

**3**

How many more white circles are needed to have 20



A

24

B

13

C

10

D

20

E

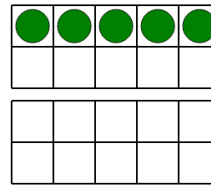
11

F

16

**4**

How many more green circles are needed to have 20



A

12

B

19

C

24

D

9

E

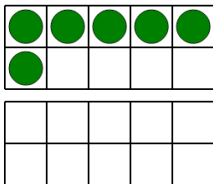
15

F

11

**5**

How many more green circles are needed to have 20



A

17

B

15

C

7

D

22

E

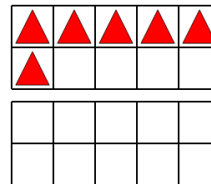
20

F

14

**6**

How many more red triangles are needed to have 20



A

23

B

14

C

12

D

18

E

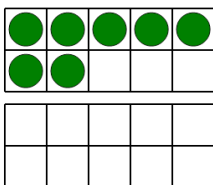
9

F

4

**7**

How many more green circles are needed to have 20



A

21

B

22

C

7

D

11

E

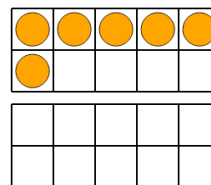
13

F

6

**8**

How many more orange circles are needed to have 20



A

15

B

14

C

22

D

10

E

4

F

23