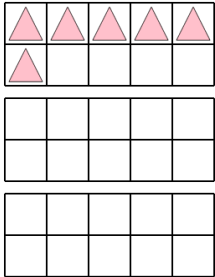


Ten Groups - To Next Ten, Two Digits, Less than 30

1

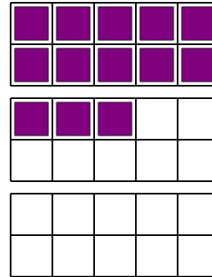
How many more pink triangles are needed to have 30



A	B	C
12	24	18
D	E	F
42	4	16

2


How many more purple squares are needed to have 30



A	B	C
24	9	23
D	E	F
17	8	20

3

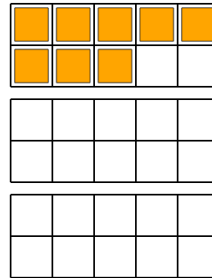
How many more purple squares are needed to have 30



A	B	C
3	2	17
D	E	F
7	12	11

4

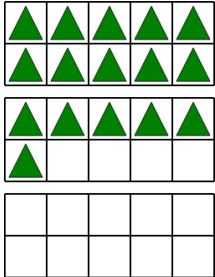
How many more orange squares are needed to have 30



A	B	C
10	24	22
D	E	F
16	40	12

5

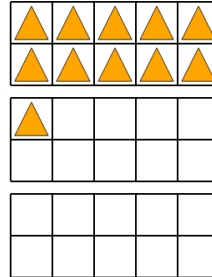
How many more green triangles are needed to have 30



A	B	C
8	4	17
D	E	F
19	14	7

6

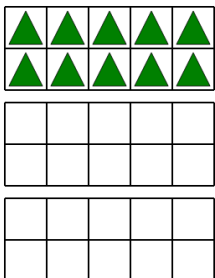
How many more orange triangles are needed to have 30



A	B	C
17	11	12
D	E	F
19	26	20

7

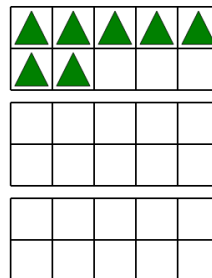
How many more green triangles are needed to have 30



A	B	C
20	10	38
D	E	F
8	18	6

8

How many more green triangles are needed to have 30



A	B	C
7	19	33
D	E	F
23	17	25