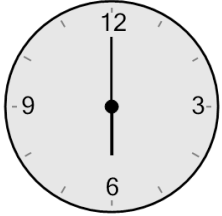


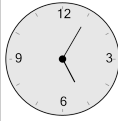
Time - Elapsed - Clock and Hours & Minutes to Clock - Half Hours

1 What will the time be after the given change?

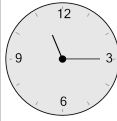


Add 1 hr

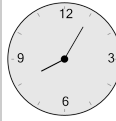
A



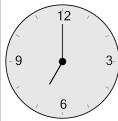
B



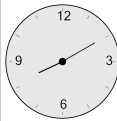
C



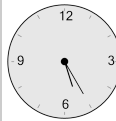
D



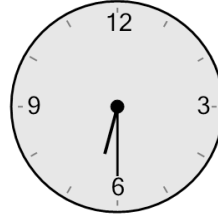
E



F

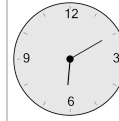


2 What will the time be after the given change?

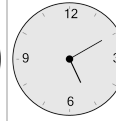


Add 30 mins

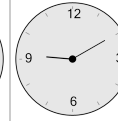
A



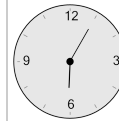
B



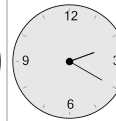
C



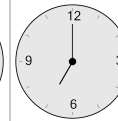
D



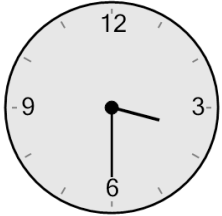
E



F

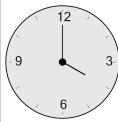


3 What will the time be after the given change?

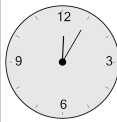


Add 30 mins

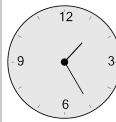
A



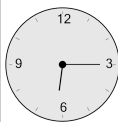
B



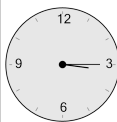
C



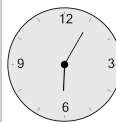
D



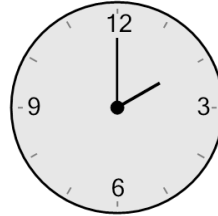
E



F

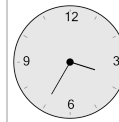


4 What will the time be after the given change?

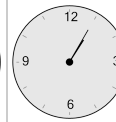


Add 30 mins

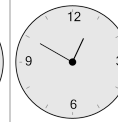
A



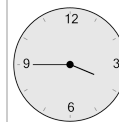
B



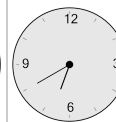
C



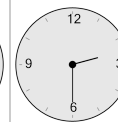
D



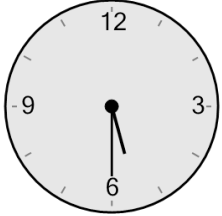
E



F

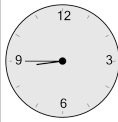


5 What will the time be after the given change?

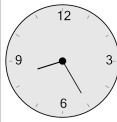


Add 1 hr

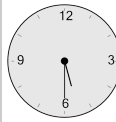
A



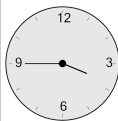
B



C



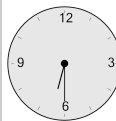
D




E



F

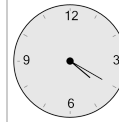


6 What will the time be after the given change?

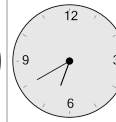


Add 1 hr 30 mins

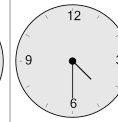
A



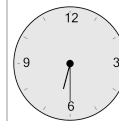
B



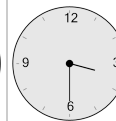
C



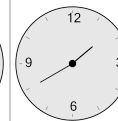
D



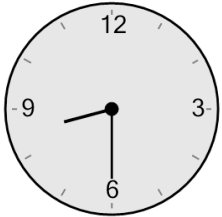
E



F

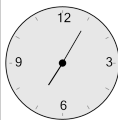


7 What will the time be after the given change?

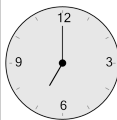


Add 30 mins

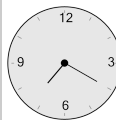
A



B



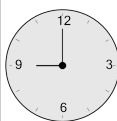
C



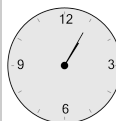
D



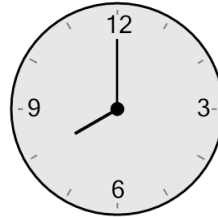
E



F

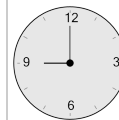


8 What will the time be after the given change?

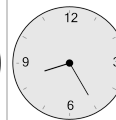


Add 1 hr

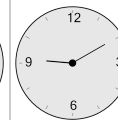
A



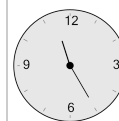
B



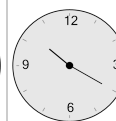
C



D



E



F

