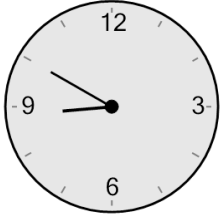




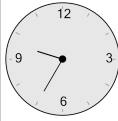
Time - Elapsed - Clock and Minutes to Clock - Five Minutes

1 What will the time be after the given change?

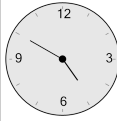


Add 50 mins

A



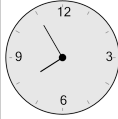
B



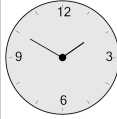
C



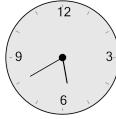
D



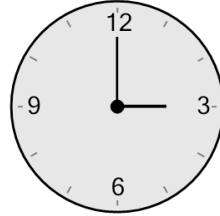
E



F

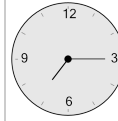


2 What will the time be after the given change?

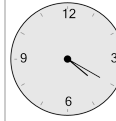


Add 80 mins

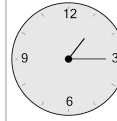
A



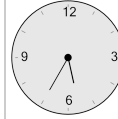
B



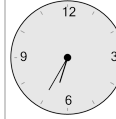
C



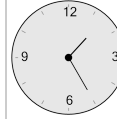
D



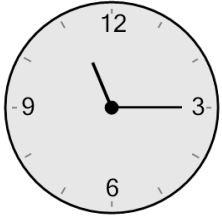
E



F

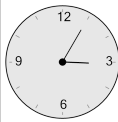


3 What will the time be after the given change?

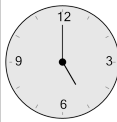


Add 95 mins

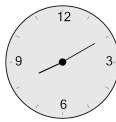
A



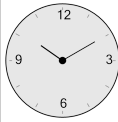
B



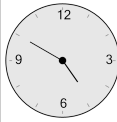
C



D



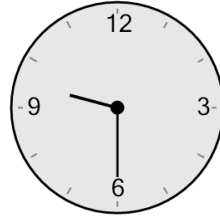
E



F

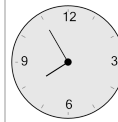


4 What will the time be after the given change?

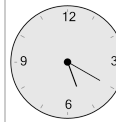


Add 5 mins

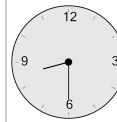
A



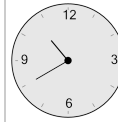
B



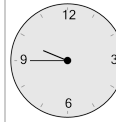
C



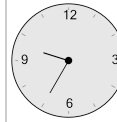
D



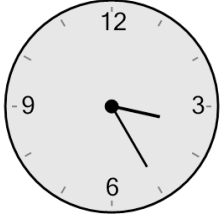
E



F



5 What will the time be after the given change?

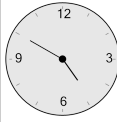


Add 65 mins

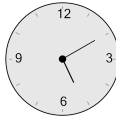
A



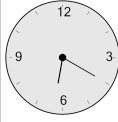
B



C



D



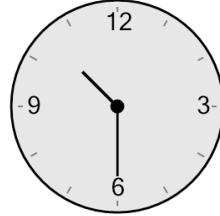
E



F

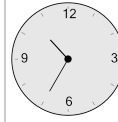


6 What will the time be after the given change?

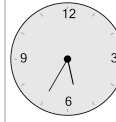


Add 5 mins

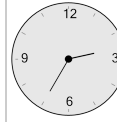
A



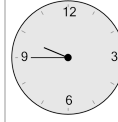
B



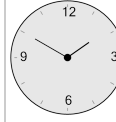
C



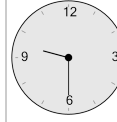
D



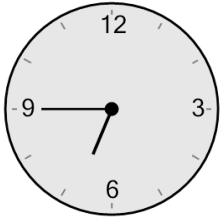
E



F

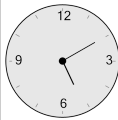


7 What will the time be after the given change?

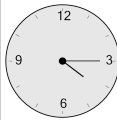


Add 40 mins

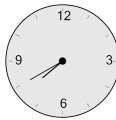
A



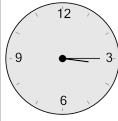
B



C



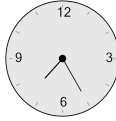
D



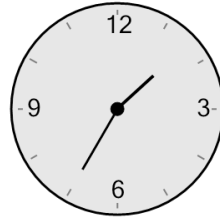
E



F

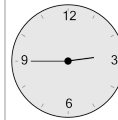


8 What will the time be after the given change?

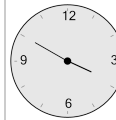


Add 135 mins

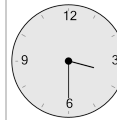
A



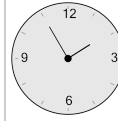
B



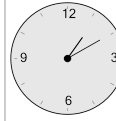
C



D



E



F

