
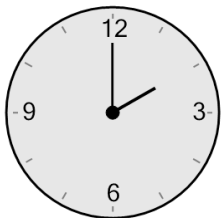




Time - Elapsed - Clock and Minutes to Clock - Full Hours



1 What will the time be after the given change?

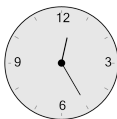


Add 60 mins

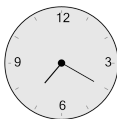
A



B



C



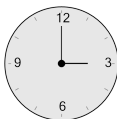
D



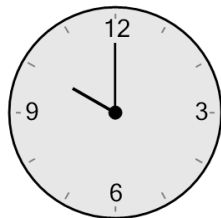
E



F

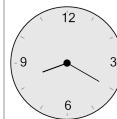


2 What will the time be after the given change?

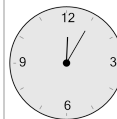


Add 60 mins

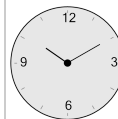
A



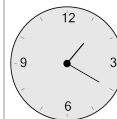
B



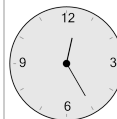
C



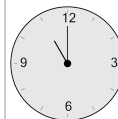
D



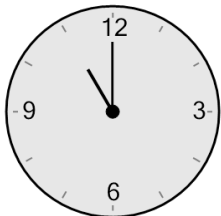
E



F



3 What will the time be after the given change?

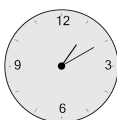


Add 60 mins

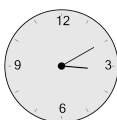
A



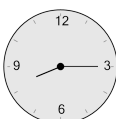
B



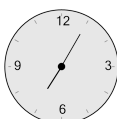
C



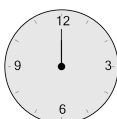
D



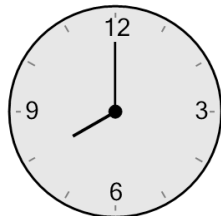
E



F

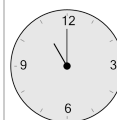


4 What will the time be after the given change?

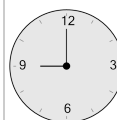


Add 60 mins

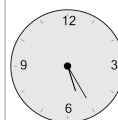
A



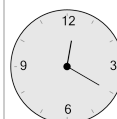
B



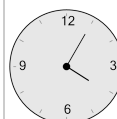
C



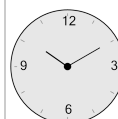
D



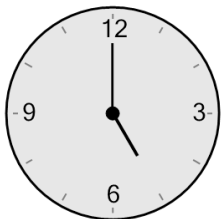
E



F

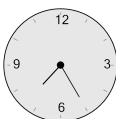


5 What will the time be after the given change?

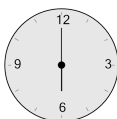


Add 60 mins

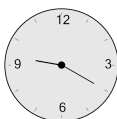
A



B



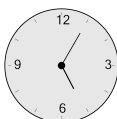
C



D



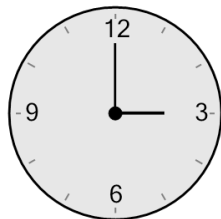
E



F

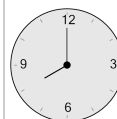


6 What will the time be after the given change?

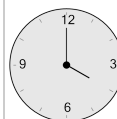


Add 60 mins

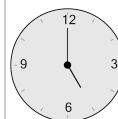
A



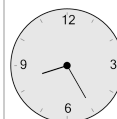
B



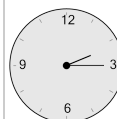
C



D



E



F

