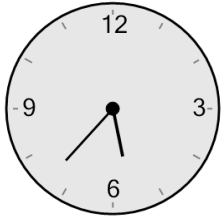




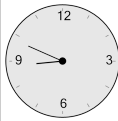
## Time - Elapsed - Clock and Minutes to Clock - One Minutes

**1** What will the time be after the given change?

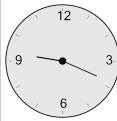


Add 52 mins

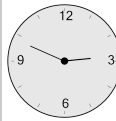
A



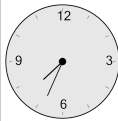
B



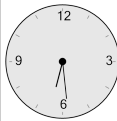
C



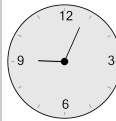
D



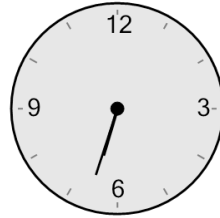
E



F

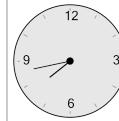


**2** What will the time be after the given change?

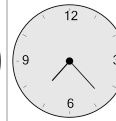


Add 50 mins

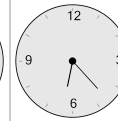
A



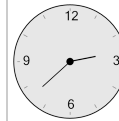
B



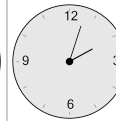
C



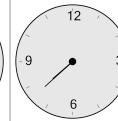
D



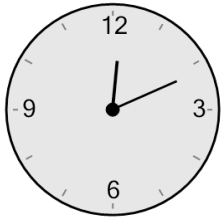
E



F

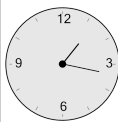


**3** What will the time be after the given change?



Add 31 mins

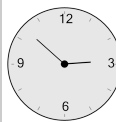
A



B



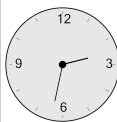
C



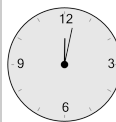
D



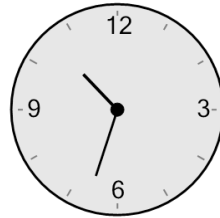
E



F

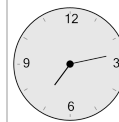


**4** What will the time be after the given change?

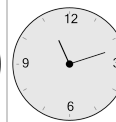


Add 39 mins

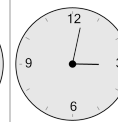
A



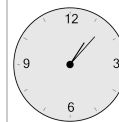
B



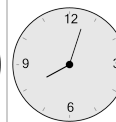
C



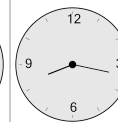
D



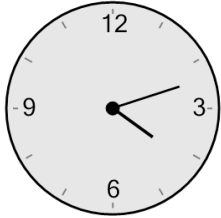
E



F

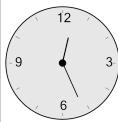


**5** What will the time be after the given change?

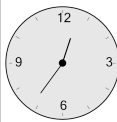


Add 84 mins

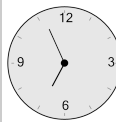
A



B



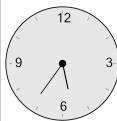
C



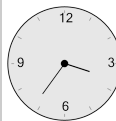
D



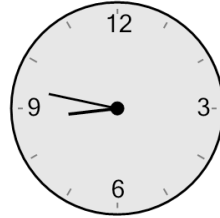
E



F

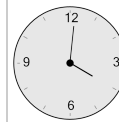


**6** What will the time be after the given change?

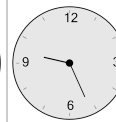


Add 39 mins

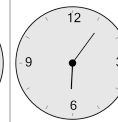
A



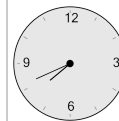
B



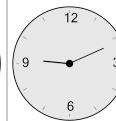
C



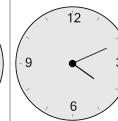
D



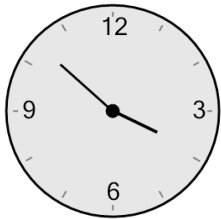
E



F



**7** What will the time be after the given change?

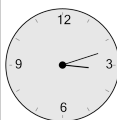


Add 11 mins

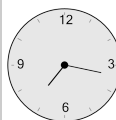
A



B



C



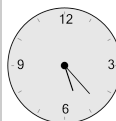
D



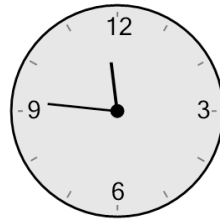
E



F

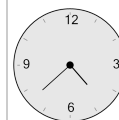


**8** What will the time be after the given change?

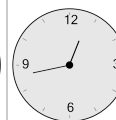


Add 57 mins

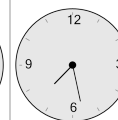
A



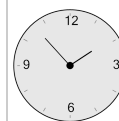
B



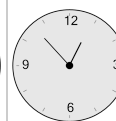
C



D



E



F

