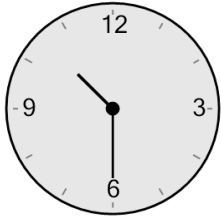


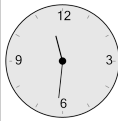
Time - Elapsed - Clock and Minutes to Clock - Quarter Hours

1 What will the time be after the given change?

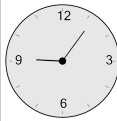


Add 61 mins

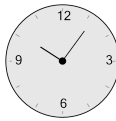
A



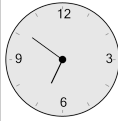
B



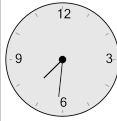
C



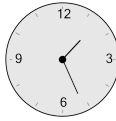
D



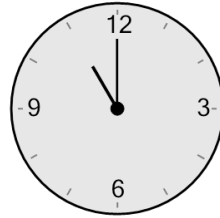
E



F

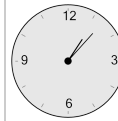


2 What will the time be after the given change?

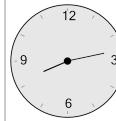


Add 2 mins

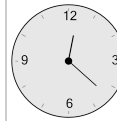
A



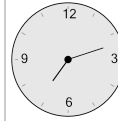
B



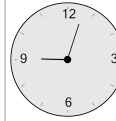
C



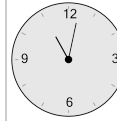
D



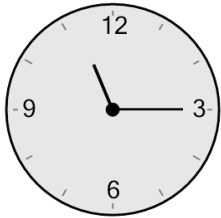
E



F

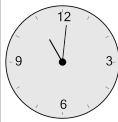


3 What will the time be after the given change?

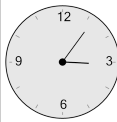


Add 1 min

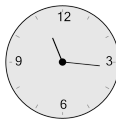
A



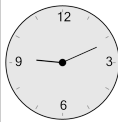
B



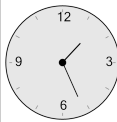
C



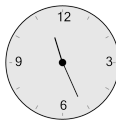
D



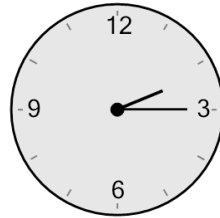
E



F

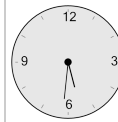


4 What will the time be after the given change?

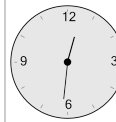


Add 1 min

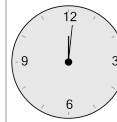
A



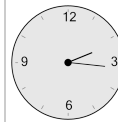
B



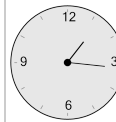
C



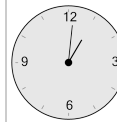
D




E



F

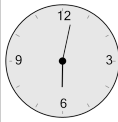


5 What will the time be after the given change?

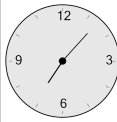


Add 3 mins

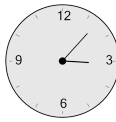
A



B



C



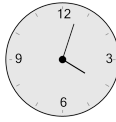
D



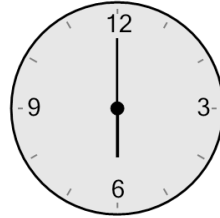
E



F

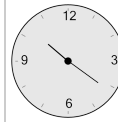


6 What will the time be after the given change?

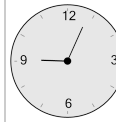


Add 1 min

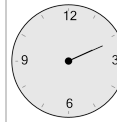
A



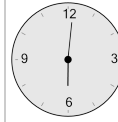
B



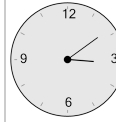
C



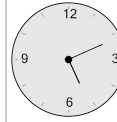
D



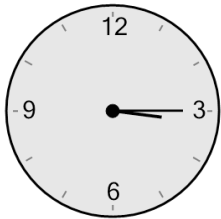
E



F



7 What will the time be after the given change?

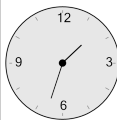


Add 63 mins

A



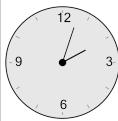
B



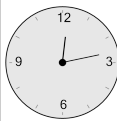
C



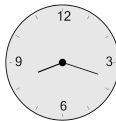
D



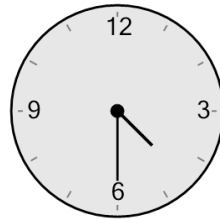
E



F

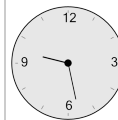


8 What will the time be after the given change?

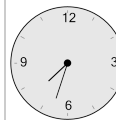


Add 63 mins

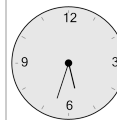
A



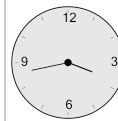
B



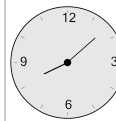
C



D



E



F

