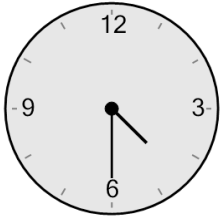




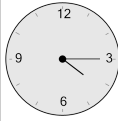
Time - Elapsed Negative - Clock and Hours & Minutes to Clock - Five Minutes

1 What will the time be after the given change?

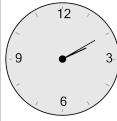


Subtract 15 mins

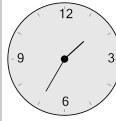
A



B



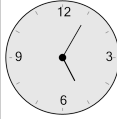
C



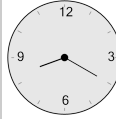
D



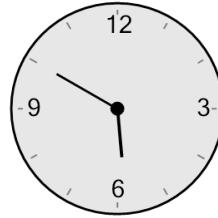
E



F

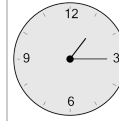


2 What will the time be after the given change?

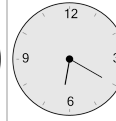


Subtract 45 mins

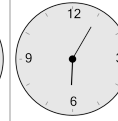
A



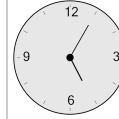
B



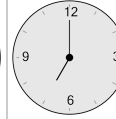
C



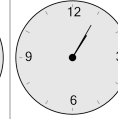
D



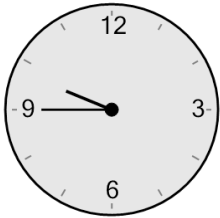
E



F

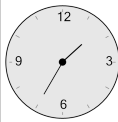


3 What will the time be after the given change?

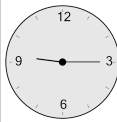


Subtract 30 mins

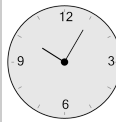
A



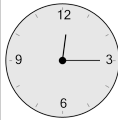
B



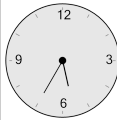
C



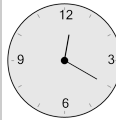
D



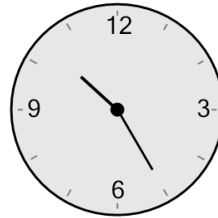
E



F

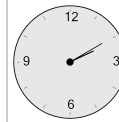


4 What will the time be after the given change?

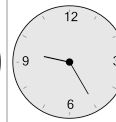


Subtract 25 mins

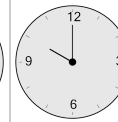
A



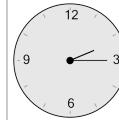
B



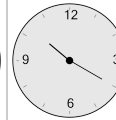
C



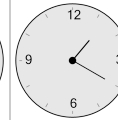
D



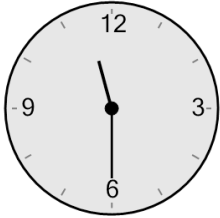
E



F

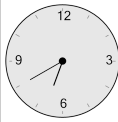


5 What will the time be after the given change?

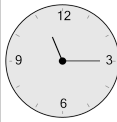


Subtract 10 mins

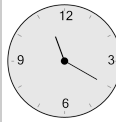
A



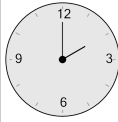
B



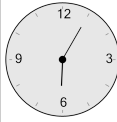
C



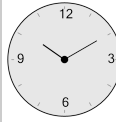
D



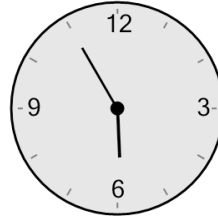
E



F

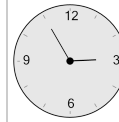


6 What will the time be after the given change?

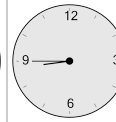


Subtract 5 mins

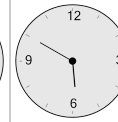
A



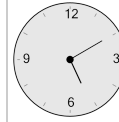
B



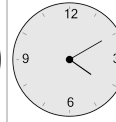
C



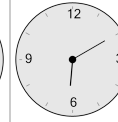
D



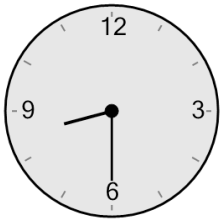
E



F

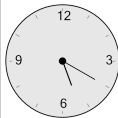


7 What will the time be after the given change?

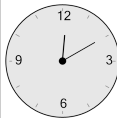


Subtract 30 mins

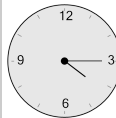
A



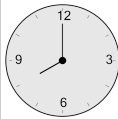
B



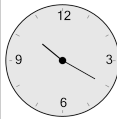
C



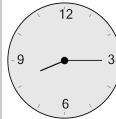
D



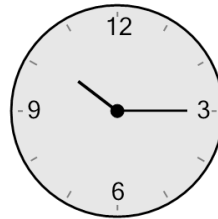
E



F

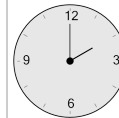


8 What will the time be after the given change?

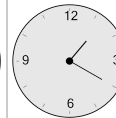


Subtract 15 mins

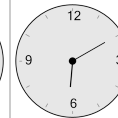
A



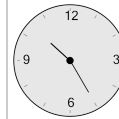
B



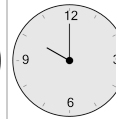
C



D



E



F

