


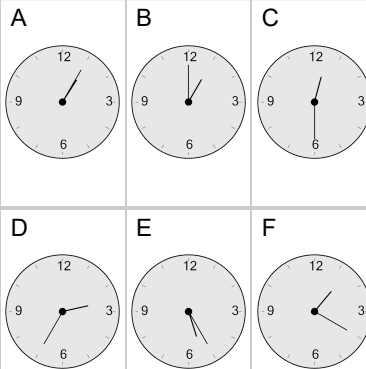


Time - Elapsed Negative - Clock and Hours & Minutes to Clock - Five Minutes

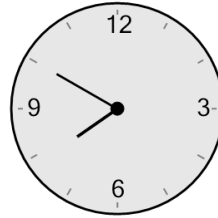
1 What will the time be after the given change?



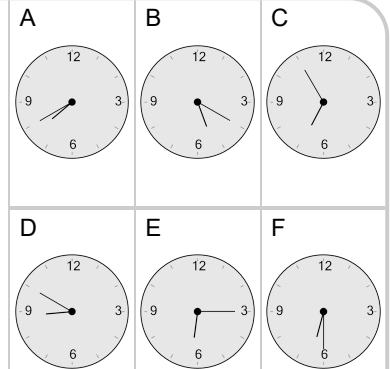
Subtract 40 mins



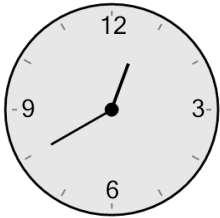
2 What will the time be after the given change?



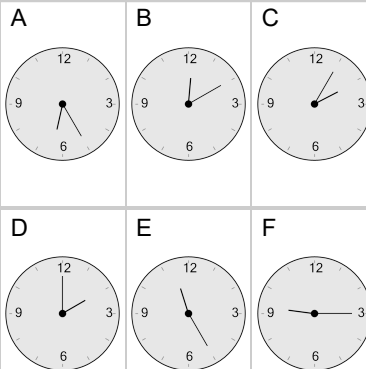
Subtract 10 mins



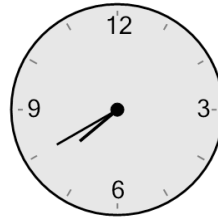
3 What will the time be after the given change?



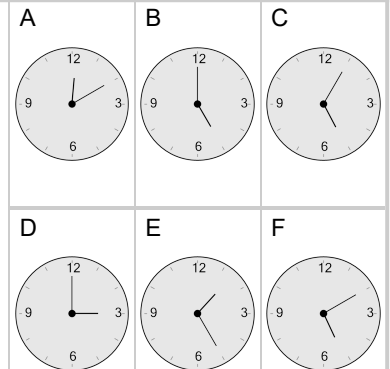
Subtract 1 hr 15 mins



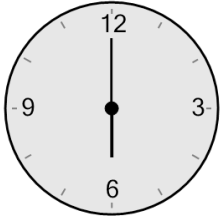
4 What will the time be after the given change?



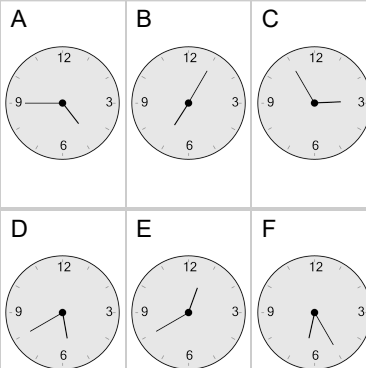
Subtract 2 hrs 40 mins



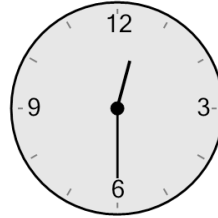
5 What will the time be after the given change?



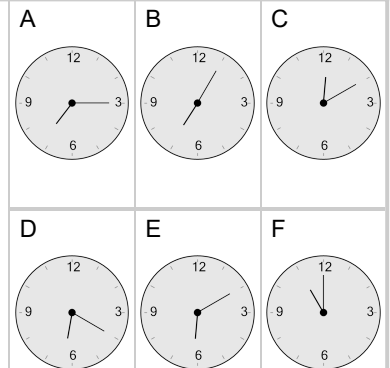
Subtract 1 hr 15 mins



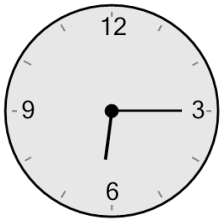
6 What will the time be after the given change?



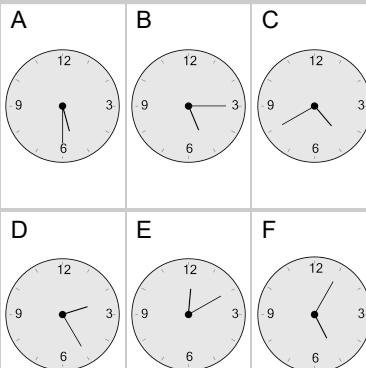
Subtract 1 hr 30 mins



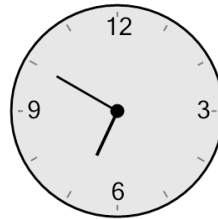
7 What will the time be after the given change?



Subtract 45 mins



8 What will the time be after the given change?



Subtract 45 mins

